

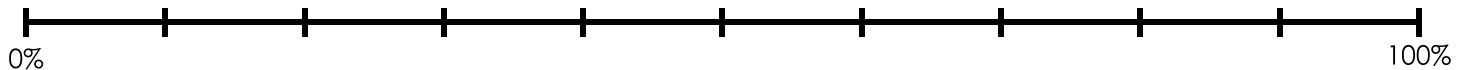
Name: _____

Double Number Lines

- a. Melinda collects antique glass bottles. She has 6 bottles made of blue glass. This is 20% of her bottle collection. How many bottles does she have altogether?

answer: _____

Number of Bottles

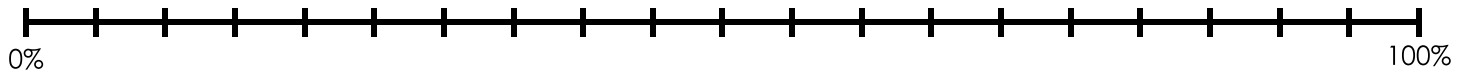


percent of bottle collection

- b. Nolan has lots of tennis balls in his garage. He has 4 green tennis balls. Only 5% of his tennis balls are green. How many tennis balls does he have altogether?

answer: _____

Number of Tennis Balls

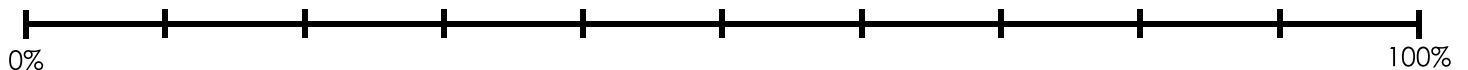


percent of tennis balls

- c. Dr. Molar is the best dentist in town. 60% of his patients are female. He has 120 female patients. How many patients does he have in all?

answer: _____

Number of Patients



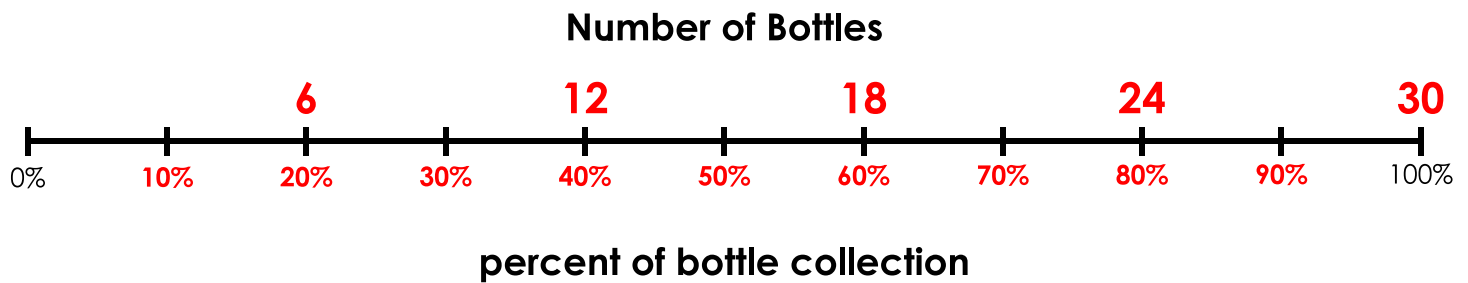
percent of patients

ANSWER KEY

Double Number Lines

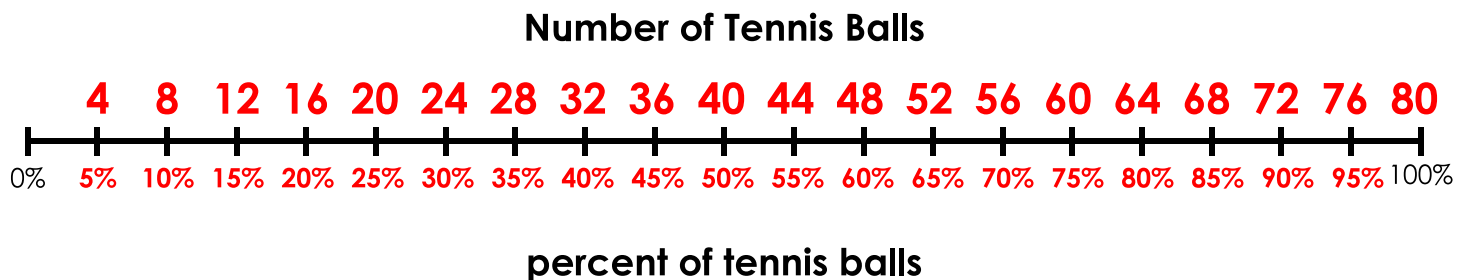
- a. Melinda collects antique glass bottles. She has 6 bottles made of blue glass. This is 20% of her bottle collection. How many bottles does she have altogether?

answer: 30 bottles



- b. Nolan has lots of tennis balls in his garage. He has 4 green tennis balls. Only 5% of his tennis balls are green. How many tennis balls does he have altogether?

answer: 80 tennis balls



- c. Dr. Molar is the best dentist in town. 60% of his patients are female. He has 120 female patients. How many patients does he have in all?

answer: 200 patients

