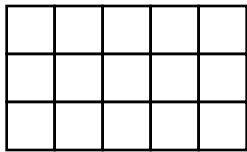


Name: _____

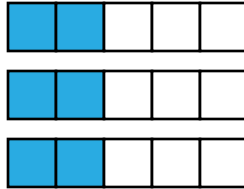
Distributive Property of Multiplication

The Distributive **Property of Multiplication** says that a multiplication array can be divided into two smaller arrays. When you add the products of the arrays, they equal the product of the larger array.

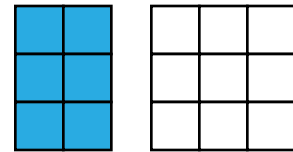
example:




3×5



$3 \times (2 + 3)$



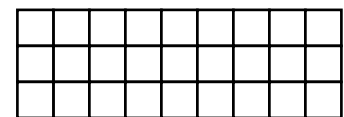

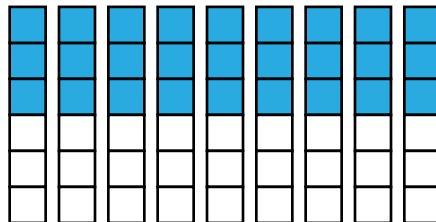

$(3 \times 2) + (3 \times 3)$



Preview

Please log in to download
the printable version of this worksheet.

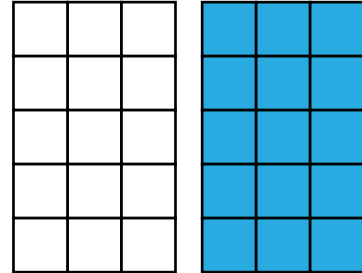





Name: _____

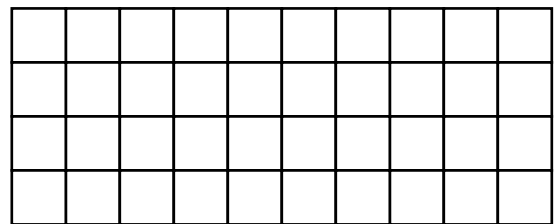
Distributive Property of Multiplication

Write the expression shown by each illustration. Then, find the product.



Preview

Please log in to download the printable version of this worksheet.

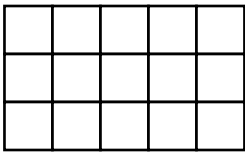


ANSWER KEY

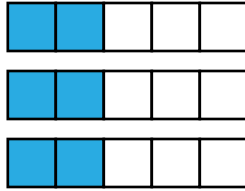
Distributive Property of Multiplication

The Distributive **Property of Multiplication** says that a multiplication array can be divided into two smaller arrays. When you add the products of the arrays, they equal the product of the larger array.

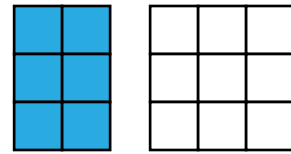
example:



$$3 \times 5$$



$$3 \times (2 + 3)$$



$$(3 \times 2) + (3 \times 3)$$

Preview

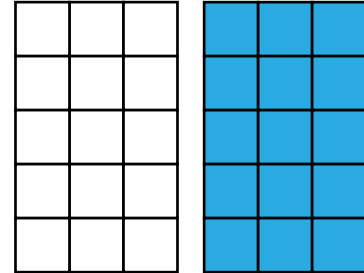

Please log in to download
the printable version of this worksheet.



ANSWER KEY

Distributive Property of Multiplication

Write the expression shown by each illustration. Then, find the product.



Preview

Please log in to download
the printable version of this worksheet.

