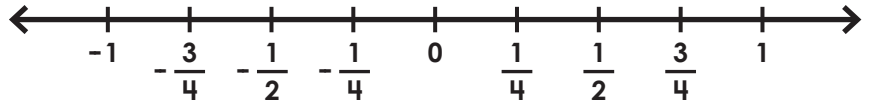


Name: _____

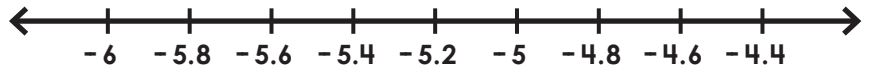
Two-Step Inequalities

Solve and graph the inequalities.

1. $15 \leq 4a + 13$




2. $-4.5 < -0.5b - 7.1$



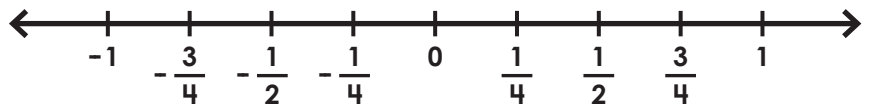


Preview

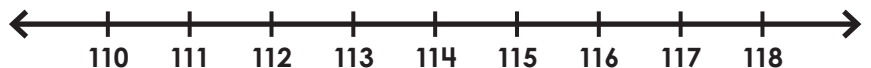
Please log in to download
the printable version of this worksheet.



5. $-4e + 4 \geq 5$



6. $3.5 - 0.02f < 1.24$



ANSWER KEY

Two-Step Inequalities

Solve and graph the inequalities.

1. $15 \leq 4a + 13$

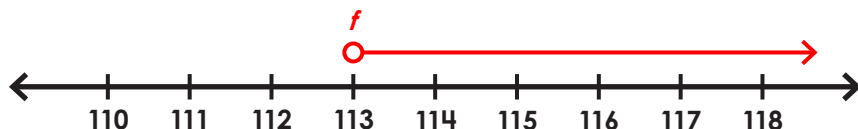


Preview

Please log in to download the printable version of this worksheet.



6. $3.5 - 0.02f < 1.24$



$f > 113$