

Name: _____

Favourite Ice Cream Pictograph

Mrs. French and Mr. Miskey are planning a party for their classes. The students are asked to vote for their favourite ice cream flavour. The list below are the results.

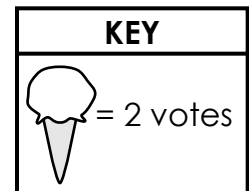
Chocolate - 8
Vanilla - 7

Chocolate Chip - 13

Cookie Dough - 8
Strawberry - 5

Use the information from the list to complete the pictograph below and answer the questions.

Flavour	Number of Votes
Chocolate	
Vanilla	
Chocolate Chip	
Cookie Dough	
Strawberry	



1. What two flavours did the students like the least? 1. _____
2. How many students voted for either cookie dough or strawberry? 2. _____
3. How many more students voted for chocolate chip than vanilla? 3. _____
4. How many votes were there in all? 4. _____

ANSWER KEY

Favourite Ice Cream Pictograph




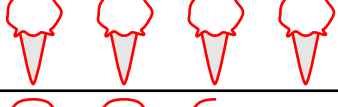

Mrs. French and Mr. Miskey are planning a party for their classes. The students are asked to vote for their favourite ice cream flavour. The list below are the results.


Chocolate - 8
Vanilla - 7

Chocolate Chip - 13

Cookie Dough - 8
Strawberry - 5

Use the information from the list to complete the pictograph below and answer the questions.

Flavour	Number of Votes
Chocolate	
Vanilla	
Chocolate Chip	
Cookie Dough	
Strawberry	

KEY
 = 2 votes

1. What two flavours did the students like the least? 1. vanilla and strawberry
2. How many students voted for either cookie dough or strawberry? 2. 13
3. How many more students voted for chocolate chip than vanilla? 3. 6
4. How many votes were there in all? 4. 41