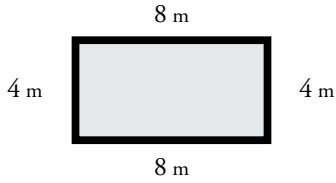


Name: _____

Perimeter

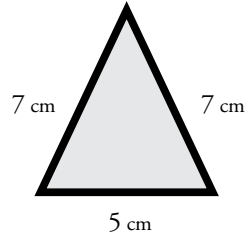
Find the perimeter of each polygon.

a.



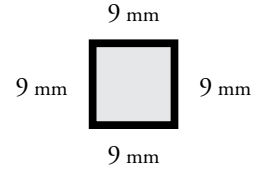
Perimeter = _____

b.



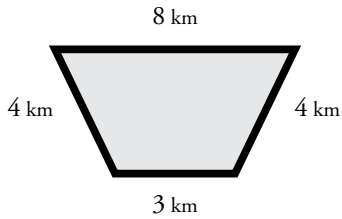
Perimeter = _____

c.



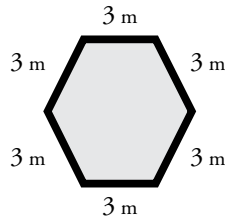
Perimeter = _____

d.



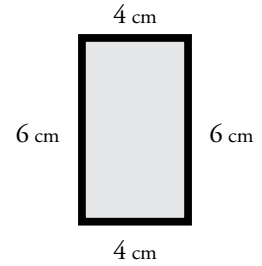
Perimeter = _____

e.



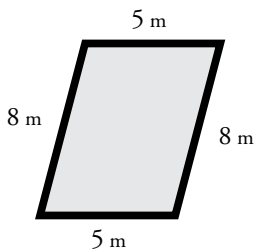
Perimeter = _____

f.



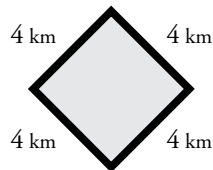
Perimeter = _____

g.



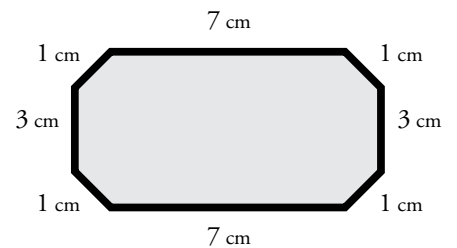
Perimeter = _____

h.



Perimeter = _____

i.



Perimeter = _____

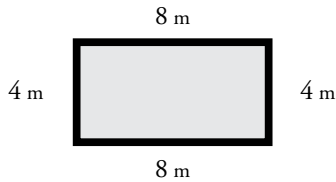
Bonus Box: Write the names of the polygons pictured above.

ANSWER KEY

Perimeter

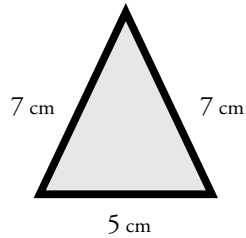
Find the perimeter of each polygon.

a.



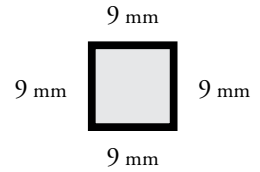
Perimeter = 24 m

b.



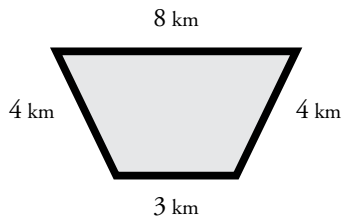
Perimeter = 19 cm

c.



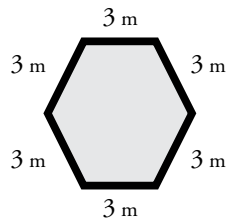
Perimeter = 36 mm

d.



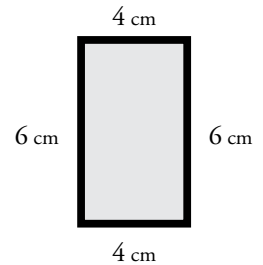
Perimeter = 19 km

e.



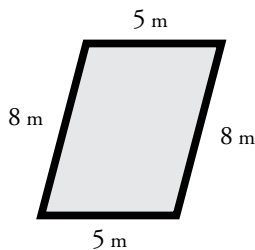
Perimeter = 18 m

f.



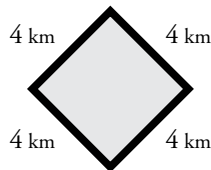
Perimeter = 20 cm

g.



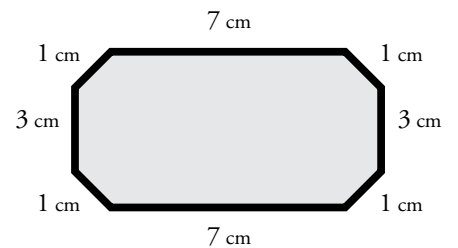
Perimeter = 26 m

h.



Perimeter = 16 km

i.



Perimeter = 24 cm

Bonus Box: Write the names of the polygons pictured above.

rectangle
trapezoid
parallelogram

triangle
hexagon
diamond or square

square
rectangle
octagon