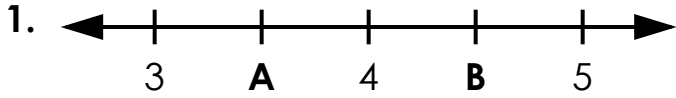


Name: _____

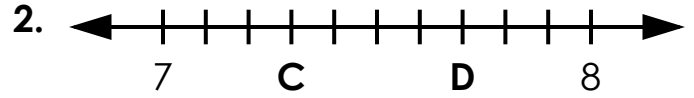
Decimal Number Lines

Write the value of the letters in decimal form.



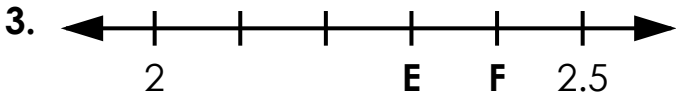
A = _____

B = _____



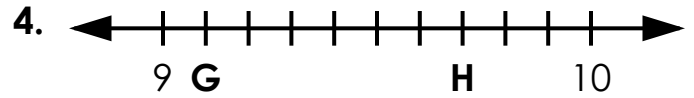
C = _____

D = _____



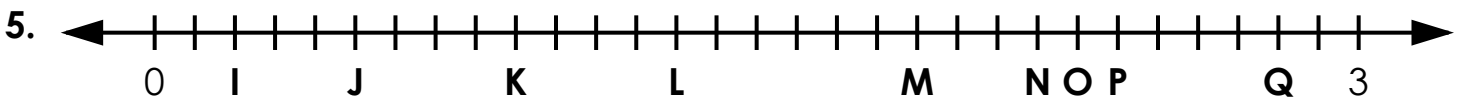
E = _____

F = _____



G = _____

H = _____



I = _____

L = _____

O = _____

J = _____

M = _____

P = _____

K = _____

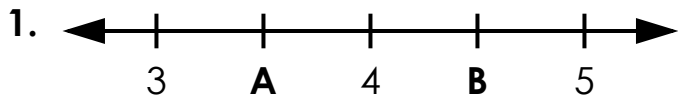
N = _____

Q = _____

ANSWER KEY

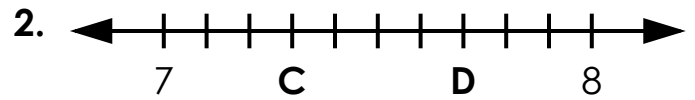
Decimal Number Lines

Write the value of the letters in decimal form.



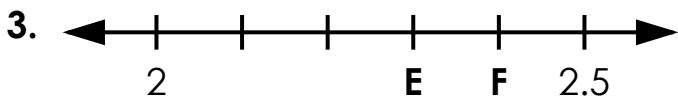
A = 3.5

B = 4.5



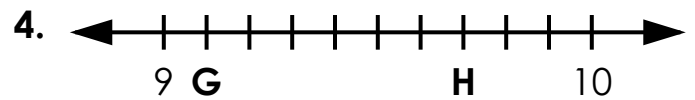
C = 7.3

D = 7.7



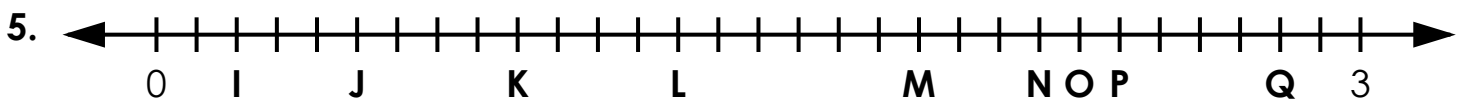
E = 2.3

F = 2.4



G = 9.1

H = 9.7



I = 0.2

L = 1.3

O = 2.3

J = 0.5

M = 1.9

P = 2.4

K = 0.9

N = 2.2

Q = 2.8