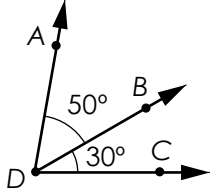


Name: _____

Combining Angles

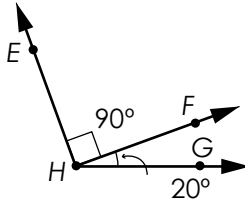
Find the measure of the angles.

1.



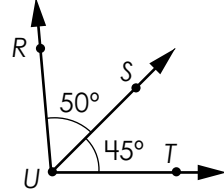
What is the measure of $\angle ADC$?

2.



What is the measure of $\angle EHG$?

3.



What is the measure of $\angle RUT$?

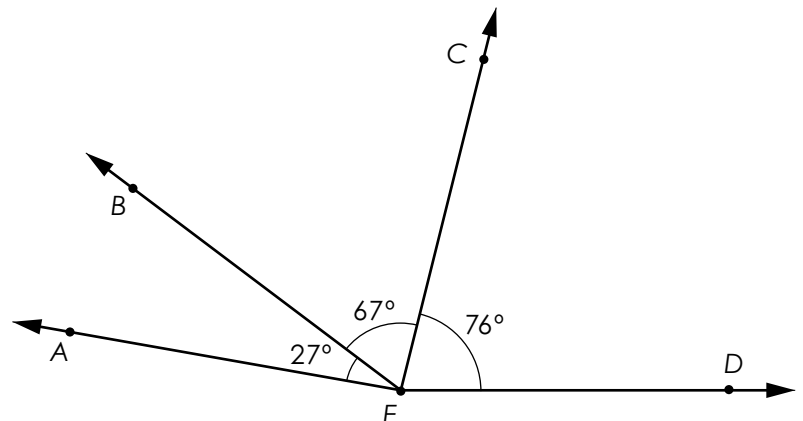
4. What is the measure of $\angle QUS$?

Preview
Please log in to download the printable version of this worksheet.

7. What is the measure of $\angle AEC$?

8. What is the measure of $\angle BED$?

9. What is the measure of $\angle AED$?

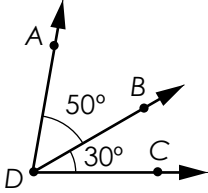


ANSWER KEY

Combining Angles

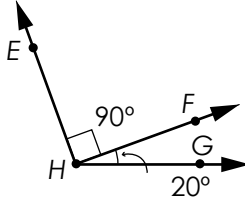
Find the measure of the angles.

1.



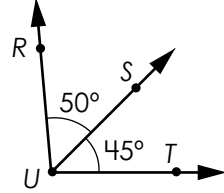
What is the measure of $\angle ADC$?

2.



What is the measure of $\angle EHG$?

3.



What is the measure of $\angle RUT$?

Preview

Please log in to download the printable version of this worksheet.

