
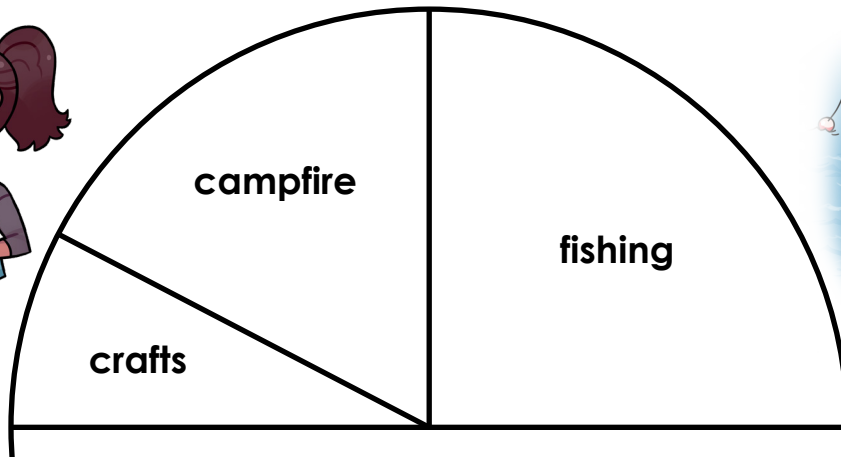


Name: _____

Summer Camp Activities

A group of kids spent a week at Big Tree Summer Camp. At the end of the week, the counselors asked campers what their favorite part of camp was. The pie graph shows their responses.



Preview

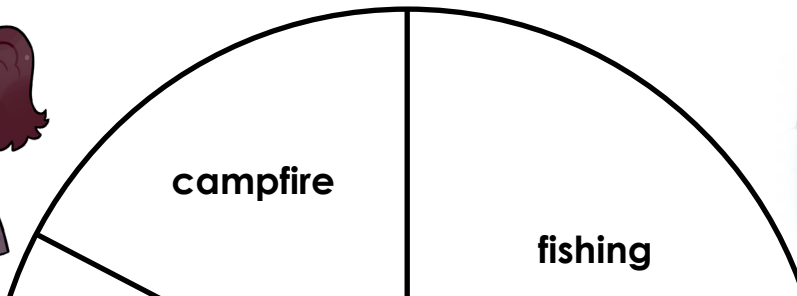
Please log in to download the printable version of this worksheet.

1. What activity did campers enjoy the most? 1. _____
2. What fraction of the campers chose fishing as their favorite activity? 2. _____
3. What fraction of the campers chose horseback riding as their favorite activity? 3. _____
4. Did more campers choose campfire or crafts as their favorite activity? 4. _____
5. Was campfire or fishing more popular with the campers? 5. _____

ANSWER KEY

Summer Camp Activities

A group of kids spent a week at Big Tree Summer Camp. At the end of the week, the counselors asked campers what their favorite part of camp was. The pie graph shows their responses.



Preview

Please log in to download the printable version of this worksheet.

- 1.
- 2.
- 3.

4. Did more campers choose campfire or crafts as their favorite activity?

4. campfire

5. Was campfire or fishing more popular with the campers?

5. fishing