
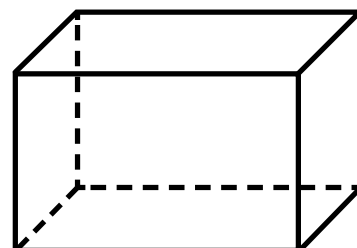
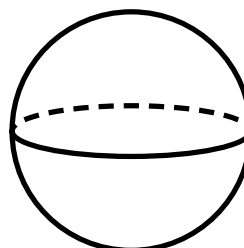

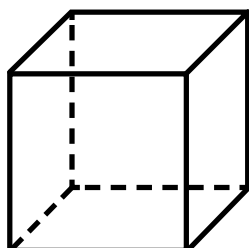
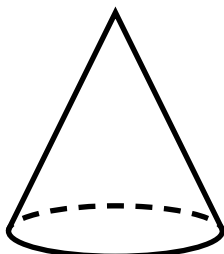


Name: _____



Math Buzz

Color the shapes that have both flat and curved surfaces.




Mara's art class is 45 minutes long. There are 3 minutes till class ends. How many minutes has Mara been in class?



Preview

Please log in to download the printable version of this worksheet.

answer: _____ minutes



Write each number in word form.

64 _____

39 _____

Add.


$$\begin{array}{r} 25 \\ + 2 \\ \hline \end{array}$$

$$\begin{array}{r} 71 \\ + 8 \\ \hline \end{array}$$

$$\begin{array}{r} 43 \\ + 5 \\ \hline \end{array}$$

Count back by hundreds.

900, 800, _____, _____, 500, _____, _____, 200, _____



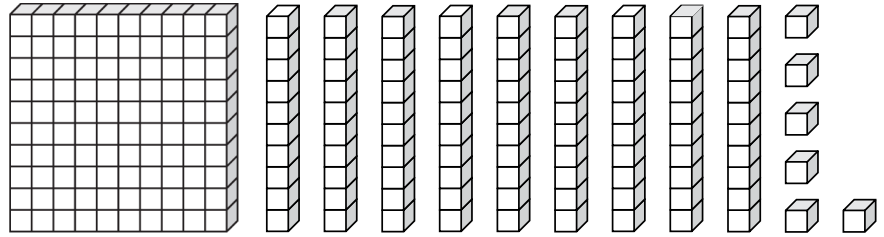
Name: _____

Math Buzz

Subtract.

	Tens	Ones
	4	0
-		8
<hr/>		

Count the blocks. Fill in the missing numbers.



one hundred ninety-six

_____ hundred _____ tens _____ ones

+ +



Preview

Please log in to download the printable version of this worksheet.

b. twenty-six



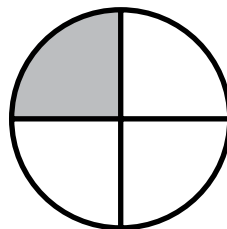
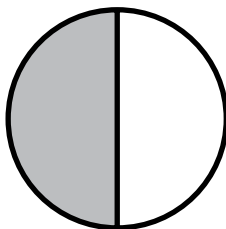

c. 26 tens

d. 20 + 6

second _____ fifth _____

fourth _____ first _____ third _____

Circle the shapes that show one half shaded.



Name: _____



Math Buzz

Write each number in standard form.

fifty-two _____

eighty-five _____

Add.

$$97 + 2 = \underline{\quad}$$

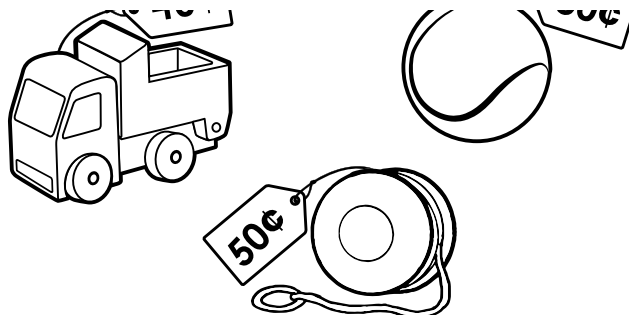

$$\underline{\quad} = 44 + 4$$

Fill in the numbers 1, 2, and 3 to order the kites from shortest to tallest.

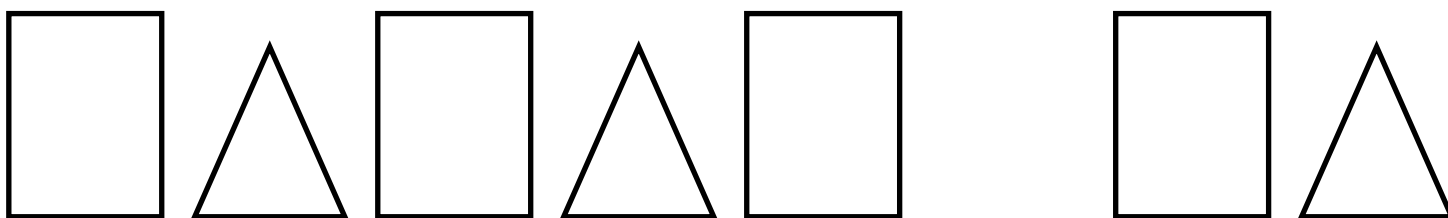



Preview

Please log in to download
the printable version of this worksheet.



Fill in the missing shape.

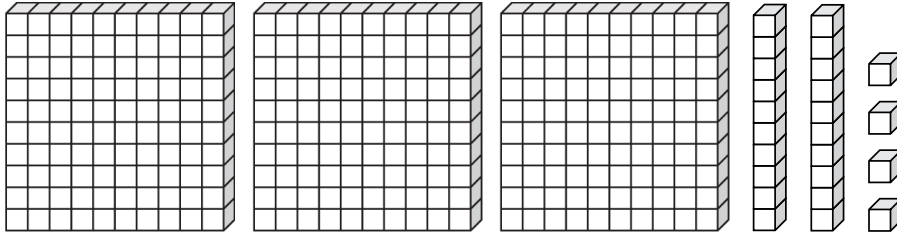




Name: _____

Math Buzz

Count the blocks. Fill in the missing numbers.



three hundred twenty-four

_____ hundreds _____ tens _____ ones

 + +

Circle even or odd.

11

even

odd

16

even

odd

Shade one half of each shape.



Preview

Please log in to download the printable version of this worksheet.

?	
21	36

_____ + _____ = _____

answer: _____ marbles



Subtract.



	Tens	Ones
	5	5
-		6


Name: _____



Math Buzz

Use the picture graph to answer the questions below.

Books Caleb Read	
September	
October	
November	?

Each  = 1 book

How many books did Caleb read in October? _____



Preview

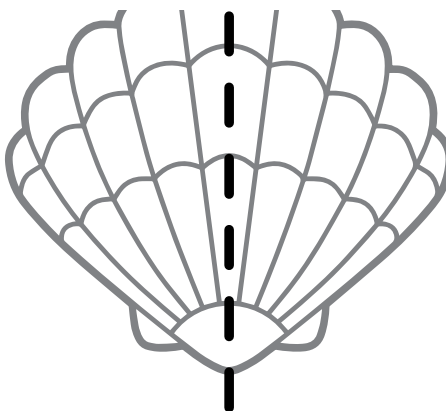
Please log in to download the printable version of this worksheet.

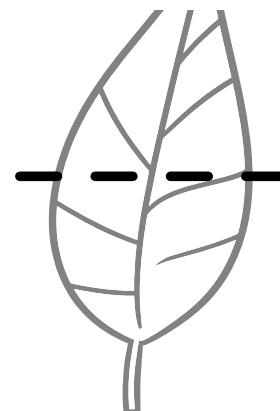
Find the sum of 84 and 3. _____

Write each number in expanded form.

73 _____

47 _____



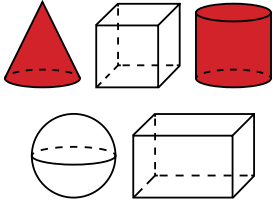


Count time by hours.

10:00, _____, _____, 1:00, _____, 3:00



Color the shapes that have both flat and curved surfaces.



Mara's art class is 45 minutes long. There are 3 minutes till class ends. How many minutes has Mara been in class?

3	?
45	

$$45 - 3 = 42$$

answer: 42 minutes

Write each number in word form.

64 sixty-four

39 thirty-nine

Add.

$$\begin{array}{r} 25 \\ + 2 \\ \hline 27 \end{array} \quad \begin{array}{r} 71 \\ + 8 \\ \hline 79 \end{array} \quad \begin{array}{r} 43 \\ + 5 \\ \hline 48 \end{array}$$

Count back by hundreds.

900, 800, 700, 600,

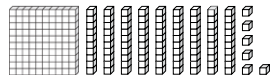
500, 400, 300,

200, 100

Subtract.

Tens	Ones
3	10
4	0
-	
8	
<hr/>	
3	2

Count the blocks. Fill in the missing numbers.



one hundred ninety-six

1 hundred 9 tens 6 ones

$$100 + 90 + 6$$

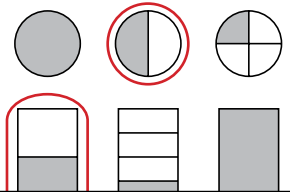
There are 26 students in Mr. Porto's class. Choose two different ways to write the number 26.

- a. 2 + 6
- b. twenty-six**
- c. 26 tens
- d. 20 + 6**

Write the ordinal number for each word.

1st	2nd	3rd	4th	5th
second	<u>2nd</u>	fifth	<u>5th</u>	
fourth	<u>4th</u>	first	<u>1st</u>	
third	<u>3rd</u>			

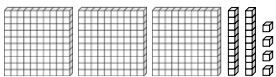
Circle the shapes that show one half shaded.



Preview

Please log in to download the printable version of this worksheet.

Count the blocks. Fill in the missing numbers.



three hundred twenty-four

3 hundred 2 tens 4 ones

$$300 + 20 + 4$$

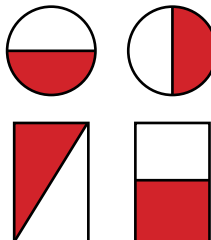
324

Circle even or odd.

11
even odd

16
even odd

Shade one half of each shape.



There were 21 red marbles and 36 blue marbles in the class reward jar. How many marbles were in the jar altogether?

?	
21	36

$$21 + 36 = 57$$

answer: 57 marbles

Subtract.

Tens	Ones
4	15
5	5
-	
6	
<hr/>	
4	9

Use the picture graph to answer the questions below.

How many books did Caleb read in October?
6

Caleb read 2 fewer books in November than in October. How many books did Caleb read in November?
4

Solve.

Add 61 and 5. 66

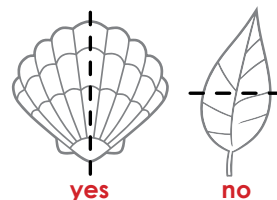
Find the sum of 84 and 3. 87

Write each number in expanded form.

73 70 + 3

47 40 + 7

Does the dotted line on each object show a line of symmetry? Write yes or no.



Count time by hours.

10:00, 11:00, 12:00,

1:00, 2:00, 3:00