

Name: \_\_\_\_\_

Time to the Nearest 5 Minutes

# Telling Time

To the Nearest 5 Minutes

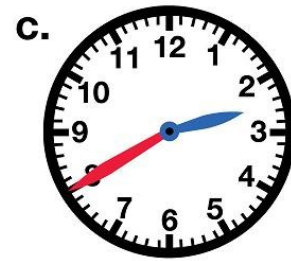
Write the time shown on each clock.



\_\_\_ : \_\_\_



\_\_\_ : \_\_\_



\_\_\_ : \_\_\_



\_\_\_ : \_\_\_




\_\_\_ : \_\_\_



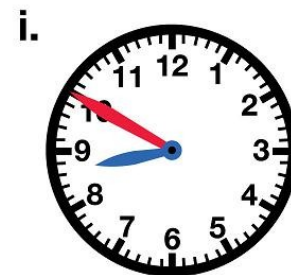
\_\_\_ : \_\_\_



\_\_\_ : \_\_\_



\_\_\_ : \_\_\_



\_\_\_ : \_\_\_

Name: \_\_\_\_\_

Time to the Nearest 5 Minutes

ANSWER KEY


# Telling Time

To the Nearest 5 Minutes

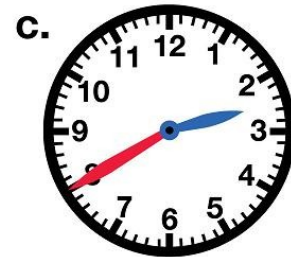
Write the time shown on each clock.




3:10



5:55



2:40



12:15



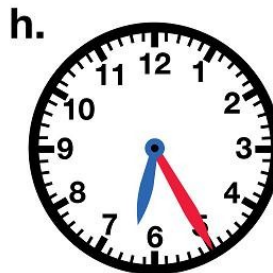
9:20



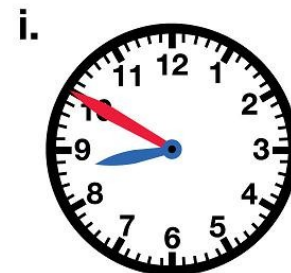
1:05



4:45



6:25



8:50