


Name: _____

Mystery State

Do you know which state is shown in the picture? Use a map of the USA to help you figure out which one it is. Then complete the information at the bottom.



State Name: _____


State Capital: _____

State Nickname: _____

State Bird: _____

State Flower: _____


Bordering States: _____



ANSWER KEY

Mystery State

Do you know which state is shown in the picture? Use a map of the USA to help you figure out which one it is. Then complete the information at the bottom.



State Name: Wyoming

State Capital: Cheyenne

State Nickname: Equality State

State Bird: Western Meadowlark

State Flower: Indian Paintbrush

Bordering States: Montana, South Dakota,

Nebraska, Colorado, Utah, Idaho

