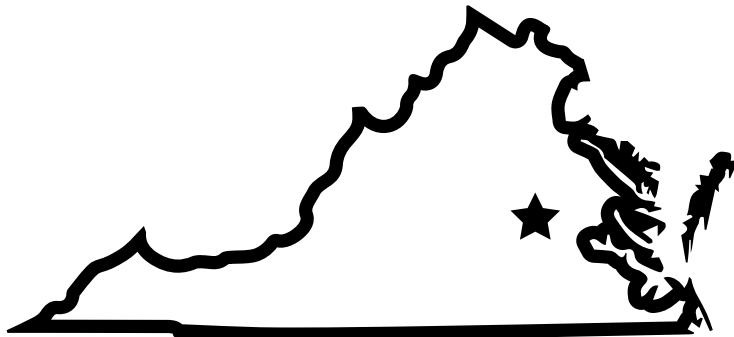


Name: _____

Mystery State

Do you know which state is shown in the picture? Use a map of the USA to help you figure out which one it is. Then complete the information at the bottom.



State Name: _____


State Capital: _____

State Nickname: _____

State Bird: _____

State Flower: _____

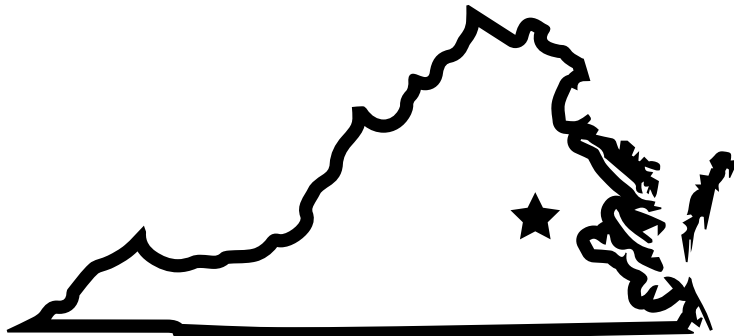
Bordering States: _____



ANSWER KEY

Mystery State

Do you know which state is shown in the picture? Use a map of the USA to help you figure out which one it is. Then complete the information at the bottom.



State Name: Virginia

State Capital: Richmond

State Nickname: The Old Dominion

State Bird: Cardinal

State Flower: American Dogwood

Bordering States: Maryland, West Virginia,

Kentucky, Tennessee, North Carolina

