


Name: \_\_\_\_\_

## Mystery State

Do you know which state is shown in the picture? Use a map of the USA to help you figure out which one it is. Then complete the information at the bottom.



State Name: \_\_\_\_\_

State Capital: \_\_\_\_\_


State Nickname: \_\_\_\_\_

State Bird: \_\_\_\_\_

State Flower: \_\_\_\_\_

Bordering States: \_\_\_\_\_

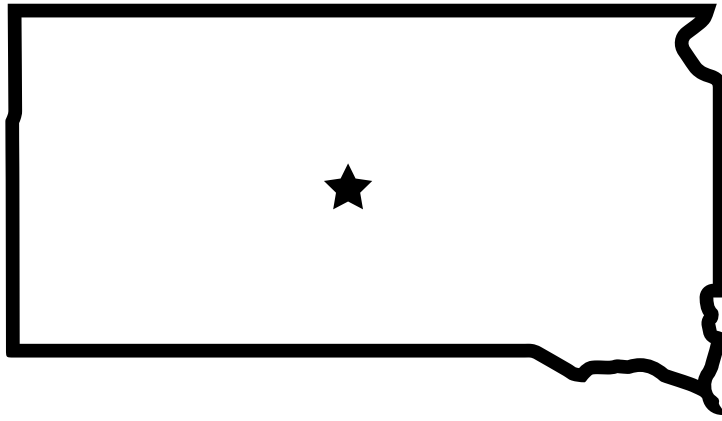
\_\_\_\_\_



## ANSWER KEY

### Mystery State

Do you know which state is shown in the picture? Use a map of the USA to help you figure out which one it is. Then complete the information at the bottom.



State Name: South Dakota

State Capital: Pierre

State Nickname: Mount Rushmore State

State Bird: Ring-Necked Pheasant

State Flower: American Pasqueflower

Bordering States: North Dakota, Minnesota,

Iowa, Nebraska, Wyoming, Montana

