


Name: _____

Mystery State

Do you know which state is shown in the picture? Use a map of the USA to help you figure out which one it is. Then complete the information at the bottom.



State Name: _____


State Capital: _____

State Nickname: _____

State Bird: _____

State Flower: _____


Bordering States: _____



ANSWER KEY

Mystery State

Do you know which state is shown in the picture? Use a map of the USA to help you figure out which one it is. Then complete the information at the bottom.



State Name: North Dakota

State Capital: Bismarck

State Nickname: Sioux State

State Bird: Western Meadowlark

State Flower: Wild Prairie Rose

Bordering States: South Dakota, Minnesota,

Montana

