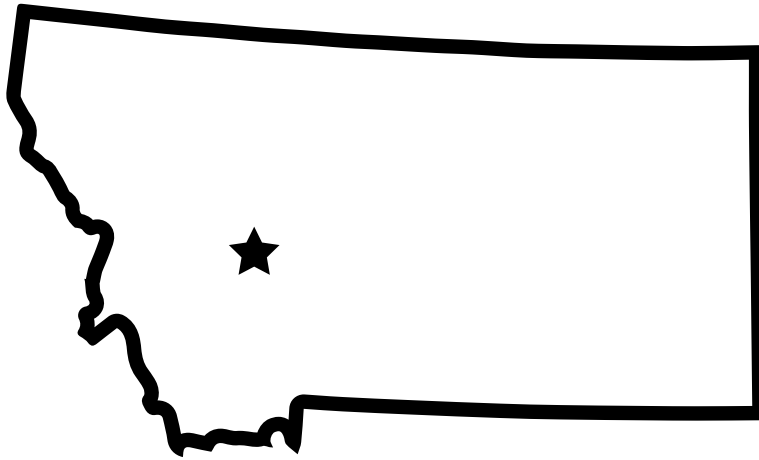


Name: _____

Mystery State

Do you know which state is shown in the picture? Use a map of the USA to help you figure out which one it is. Then complete the information at the bottom.



State Name: _____


State Capital: _____

State Nickname: _____

State Bird: _____

State Flower: _____

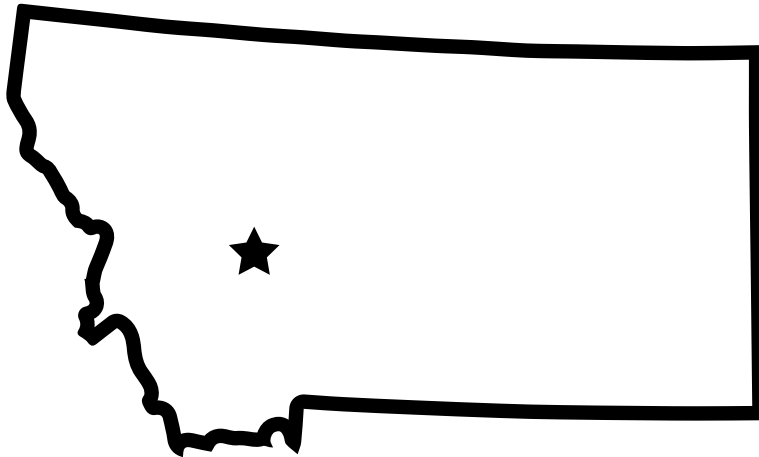
Bordering States: _____



ANSWER KEY

Mystery State

Do you know which state is shown in the picture? Use a map of the USA to help you figure out which one it is. Then complete the information at the bottom.



State Name: Montana

State Capital: Helena

State Nickname: Treasure State

State Bird: Western Meadowlark

State Flower: Bitterroot

Bordering States: North Dakota, South Dakota,

Wyoming, Idaho

