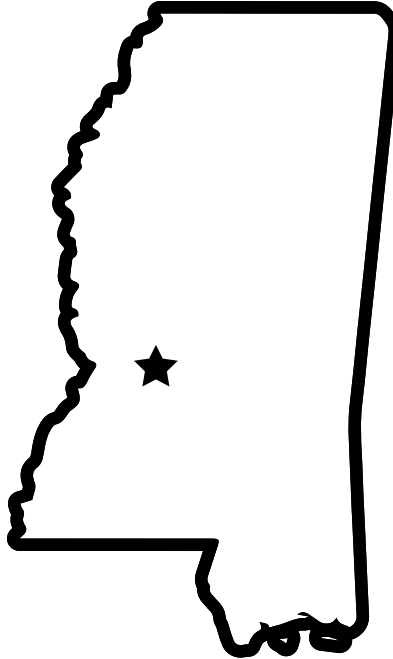


Name: _____

Mystery State

Do you know which state is shown in the picture? Use a map of the USA to help you figure out which one it is. Then complete the information at the bottom.



State Name: _____


State Capital: _____

State Nickname: _____

State Bird: _____

State Flower: _____

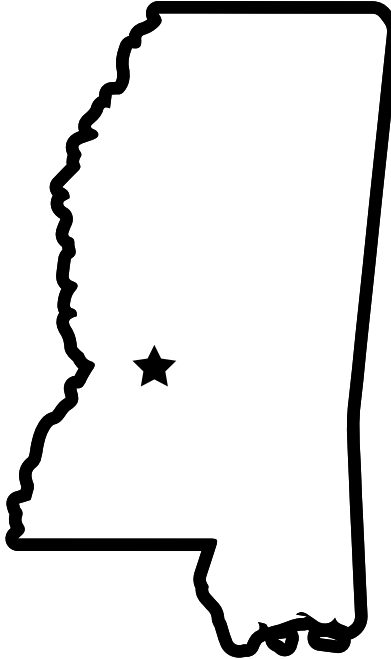
Bordering States: _____



ANSWER KEY

Mystery State

Do you know which state is shown in the picture? Use a map of the USA to help you figure out which one it is. Then complete the information at the bottom.



State Name: Mississippi

State Capital: Jackson

State Nickname: Magnolia State

State Bird: Mockingbird

State Flower: Flower of the Magnolia

Bordering States: Alabama, Tennessee,

Arkansas, Louisiana

