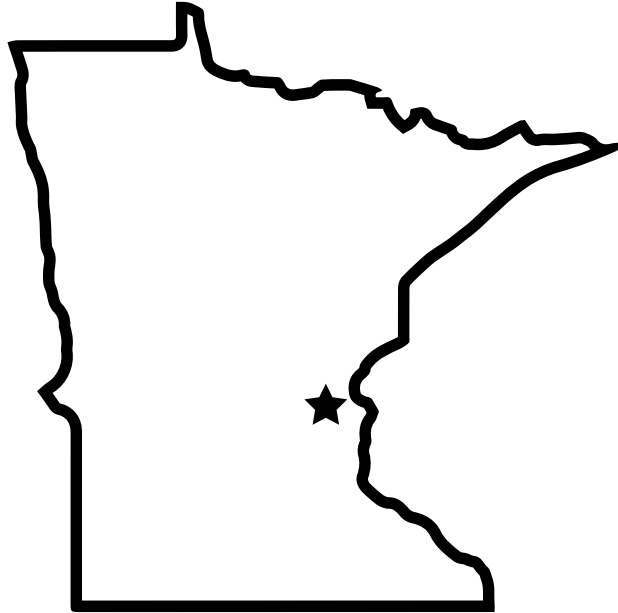


Name: \_\_\_\_\_

## Mystery State

Do you know which state is shown in the picture? Use a map of the USA to help you figure out which one it is. Then complete the information at the bottom.



State Name: \_\_\_\_\_

State Capital: \_\_\_\_\_


State Nickname: \_\_\_\_\_

State Bird: \_\_\_\_\_

State Flower: \_\_\_\_\_

Bordering States: \_\_\_\_\_

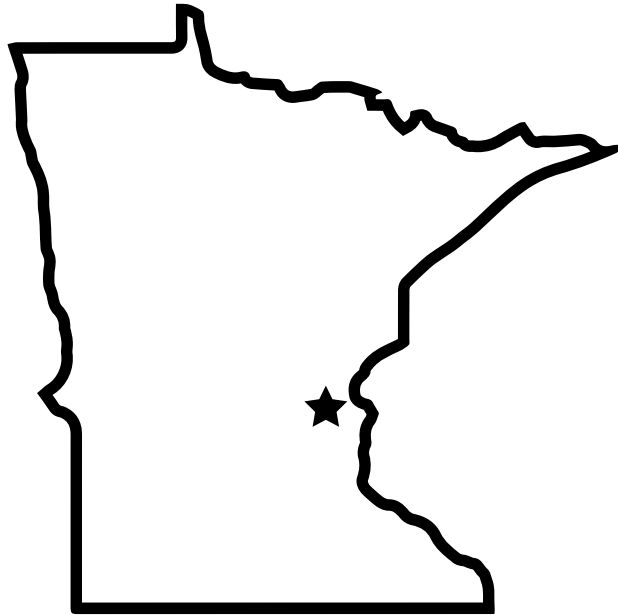
\_\_\_\_\_



## ANSWER KEY

### Mystery State

Do you know which state is shown in the picture? Use a map of the USA to help you figure out which one it is. Then complete the information at the bottom.



State Name: Minnesota

State Capital: St. Paul

State Nickname: North Star State

State Bird: Common Loon

State Flower: Lady Slipper

Bordering States: Wisconsin, Iowa,

South Dakota, North Dakota

