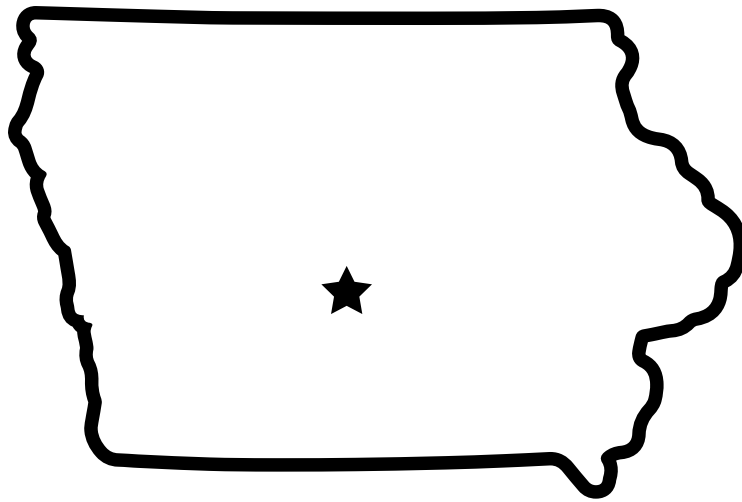


Name: _____

Mystery State

Do you know which state is shown in the picture? Use a map of the USA to help you figure out which one it is. Then complete the information at the bottom.



State Name: _____


State Capital: _____

State Nickname: _____

State Bird: _____

State Flower: _____

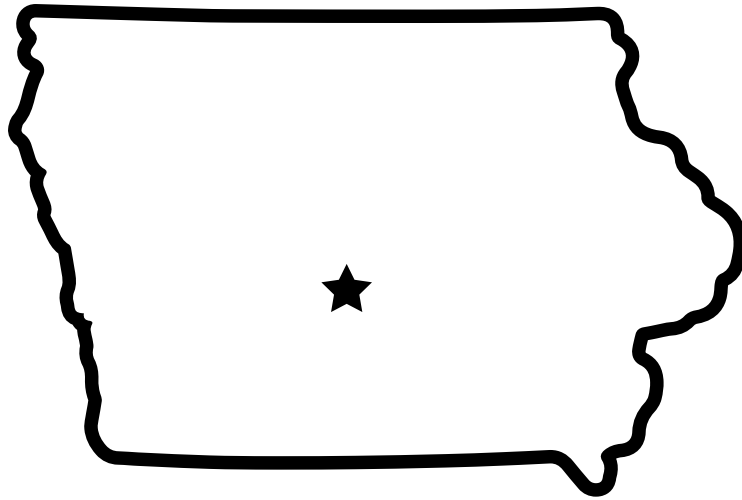
Bordering States: _____



ANSWER KEY

Mystery State

Do you know which state is shown in the picture? Use a map of the USA to help you figure out which one it is. Then complete the information at the bottom.



State Name: Iowa

State Capital: Des Moines

State Nickname: Hawkeye State

State Bird: Eastern Goldfinch

State Flower: Wild Rose

Bordering States: Wisconsin, Minnesota,

South Dakota, Nebraska, Missouri, Illinois

