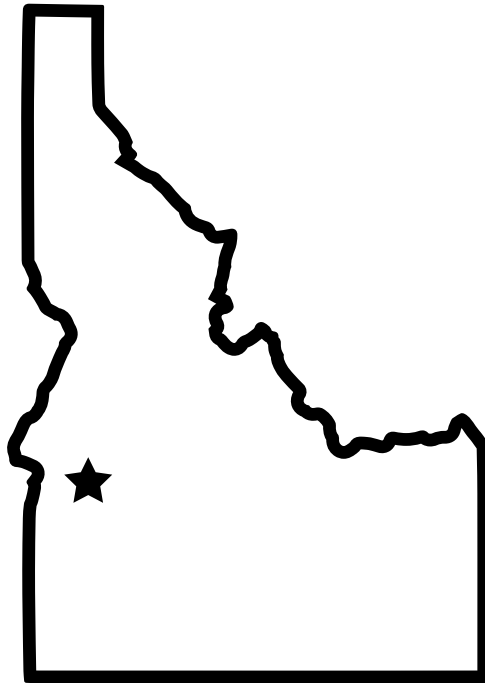


Name: _____

Mystery State

Do you know which state is shown in the picture? Use a map of the USA to help you figure out which one it is. Then complete the information at the bottom.



State Name: _____


State Capital: _____

State Nickname: _____

State Bird: _____

State Flower: _____

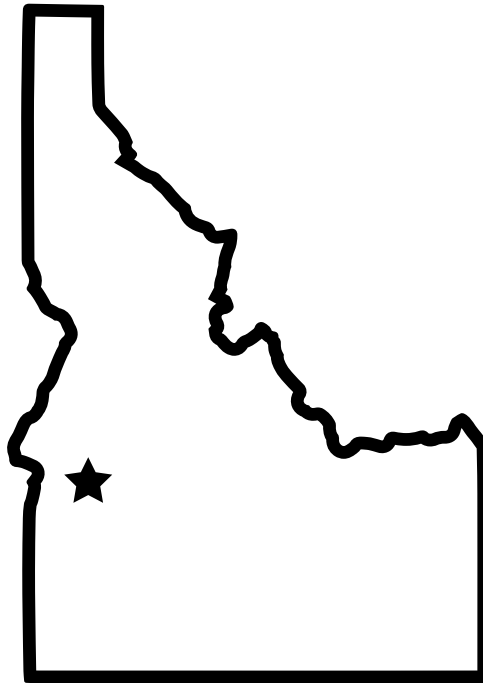
Bordering States: _____



ANSWER KEY

Mystery State

Do you know which state is shown in the picture? Use a map of the USA to help you figure out which one it is. Then complete the information at the bottom.



State Name: Idaho

State Capital: Boise

State Nickname: Gem State

State Bird: Mountain Bluebird

State Flower: Syringa

Bordering States: Washington, Oregon,

Nevada, Utah, Wyoming, Montana

