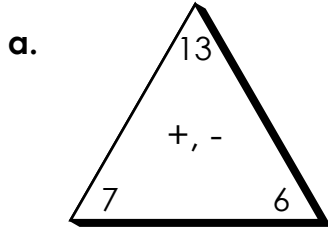


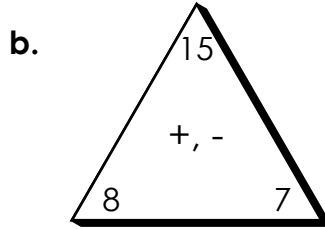
Name: _____

Fact Families

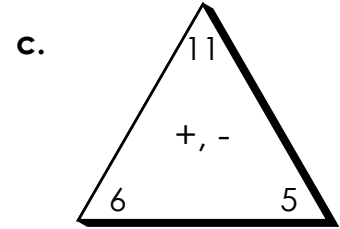
Use addition and subtraction to write the fact family for each.



$$\begin{aligned} ___ + ___ &= ___ \\ ___ + ___ &= ___ \\ ___ - ___ &= ___ \\ ___ - ___ &= ___ \end{aligned}$$



$$\begin{aligned} ___ + ___ &= ___ \\ ___ + ___ &= ___ \\ ___ - ___ &= ___ \\ ___ - ___ &= ___ \end{aligned}$$



$$\begin{aligned} ___ + ___ &= ___ \\ ___ + ___ &= ___ \\ ___ - ___ &= ___ \\ ___ - ___ &= ___ \end{aligned}$$

Use addition

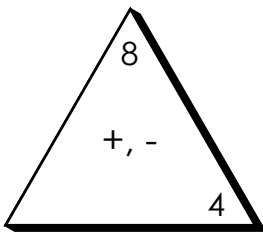
PREVIEW

Please log in or register to download the printable version of this worksheet.

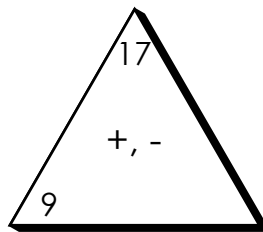
d.



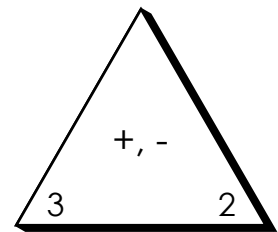
g.



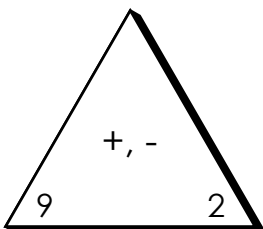
h.



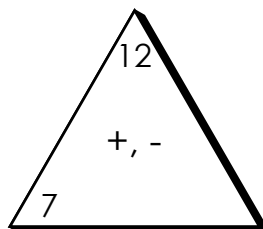
i.



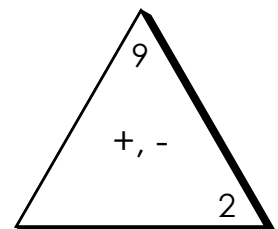
j.



k.



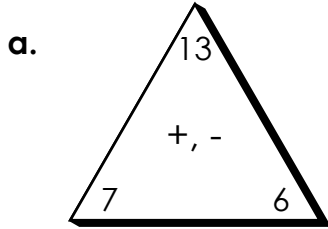
l.



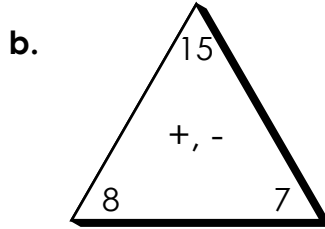
ANSWER KEY

Fact Families

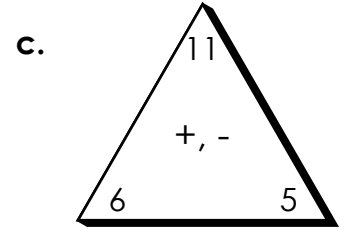
Use addition and subtraction to write the fact family for each.



$$\begin{array}{r} 7 + 6 = 13 \\ 6 + 7 = 13 \\ 13 - 7 = 6 \\ 13 - 6 = 7 \end{array}$$



$$\begin{array}{r} 8 + 7 = 15 \\ 7 + 8 = 15 \\ 15 - 8 = 7 \\ 15 - 7 = 8 \end{array}$$



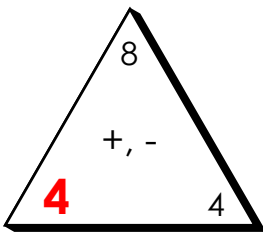
$$\begin{array}{r} 6 + 5 = 11 \\ 5 + 6 = 11 \\ 11 - 6 = 5 \\ 11 - 5 = 6 \end{array}$$

Use addition

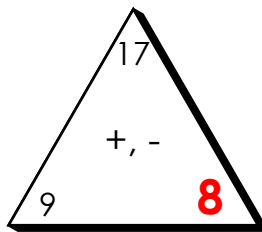
d.



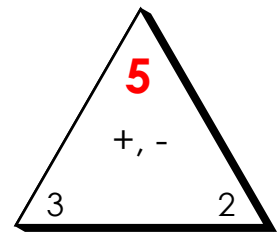
g.



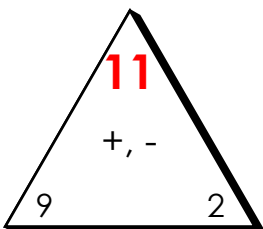
h.



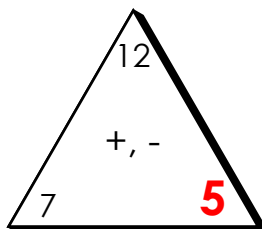
i.



j.



k.



l.

