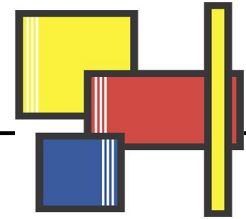


Name: _____



Quadrilateral Questions

1. How many sides does a quadrilateral have? 1. _____

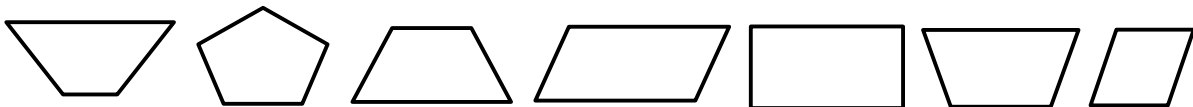
2. How many pairs of parallel sides does a rectangle have? 2. _____

3. How many pairs of parallel sides does a trapezoid have? 3. _____

4. Name two quadrilaterals in which all the sides have an equal length. 4. _____

5. Name two quadrilaterals that have four right angles. 5. _____

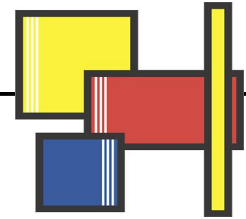
6. Color the trapezoid that is next to the rhombus.



7. List three ways a rectangle and a square are alike.

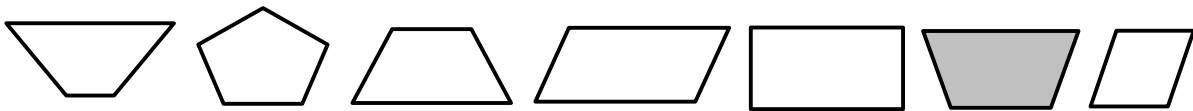
8. List one way a parallelogram and a rhombus are different.

Quadrilateral Questions



1. How many sides does a quadrilateral have? **1. 4**
2. How many pairs of parallel sides does a rectangle have? **2. 2**
3. How many pairs of parallel sides does a trapezoid have? **3. 1**
4. Name two quadrilaterals in which all the sides have an equal length. **4. rhombus
square**
5. Name two quadrilaterals that have four right angles. **5. square
rectangle**

6. Color the trapezoid that is next to the rhombus.



7. List three ways a rectangle and a square are alike.

A rectangle and a square both have four sides, both have two pairs of parallel sides, and both have four 90-degree angles. (Also accept, both made from line segments & both quadrilaterals.)

8. List one way a parallelogram and a rhombus are different.

A rhombus has sides that are all the same length. A parallelogram has two pairs of parallel sides, but the lengths of can be different lengths as long as opposite sides are equal.