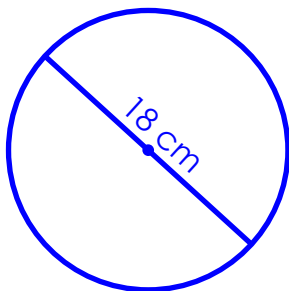


Name: \_\_\_\_\_

## Area of a Circle



$$A = \pi r^2$$

$$\pi \approx 3.14$$

$$A = 3.14 \cdot 81$$

$$A = 254.34 \text{ cm}$$

Find the area of each circle. Use 3.14 for pi. Show your work.

a.

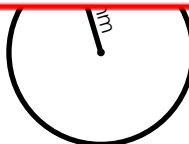
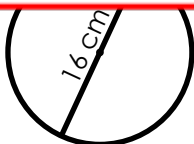


b.

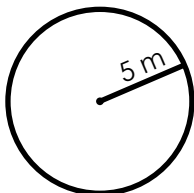


# ~ PREVIEW ~

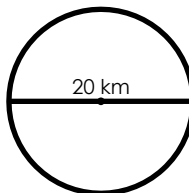
Please log in or register to download the printable version of this worksheet.



e.




f.



# ANSWER KEY

## Area of a Circle



$$A = \pi r^2$$

$$\pi \approx 3.14$$

$$A = 3.14 \cdot 81$$

$$A = 254.34 \text{ cm}$$

Find the area of each circle. Use 3.14 for pi. Show your work.



# ~ PREVIEW ~

Please log in or register to download  
the printable version of this worksheet.