

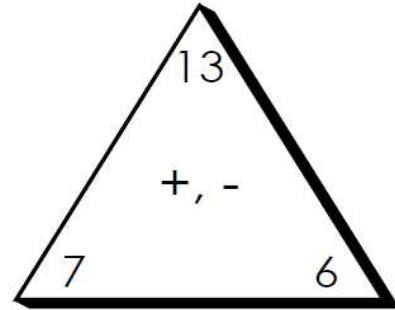
# Mixed Math: B-8

1. What is the 1st month of the year?  
\_\_\_\_\_

What is the 5th month of the year?  
\_\_\_\_\_

What is the 10th month of the year?  
\_\_\_\_\_

3. Write the fact family.



\_\_\_\_\_ + \_\_\_\_\_ = \_\_\_\_\_

\_\_\_\_\_ + \_\_\_\_\_ = \_\_\_\_\_

\_\_\_\_\_ : \_\_\_\_\_ = \_\_\_\_\_

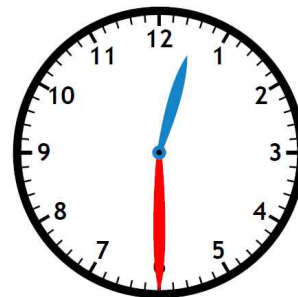
\_\_\_\_\_ : \_\_\_\_\_ = \_\_\_\_\_

2. Christian and his sister have 7 apples. How many apples do they have altogether?  
(Show your work and label your answer.)

**PREVIEW**

Please log in or register to download the printable version of this worksheet.

4. What time will it be in 30 minutes?



answer: \_\_\_\_\_

answer: \_\_\_\_\_

# ANSWER KEY

Skills: Add/subtract, Calendars, Time

## Mixed Math: B-8

1. What is the 1st month of the year?

January

What is the 5th month of the year?

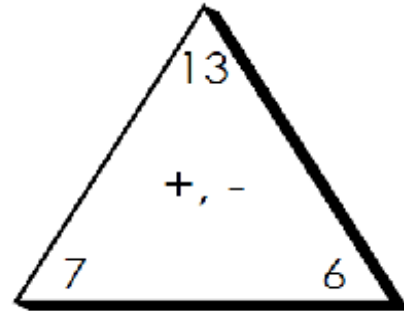
May

What is the 10th month of the year?

2. Christian caught 26 fish in 1 month. His brother caught 38. How many fish did they catch altogether?  
(Show your work and label your answer.)

answer: 64 fish

3. Write the fact family.



$$\underline{7} + \underline{6} = \underline{13}$$

$$\underline{6} + \underline{7} = \underline{13}$$

6

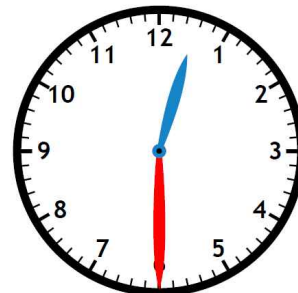
7



### PREVIEW

Please log in or register to download the printable version of this worksheet.

4. What time will it be in 30 minutes?



answer: 1:00