

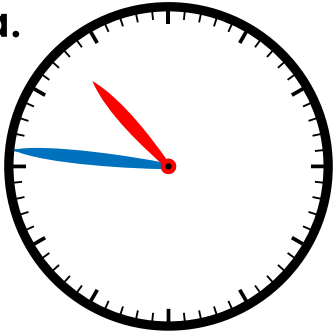
Name: _____

Time: Nearest Minute
(No Numbers on the Clock Face)

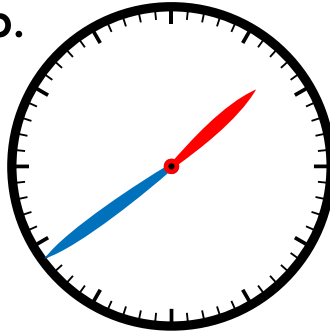
Telling Time

Write the time shown on each clock.

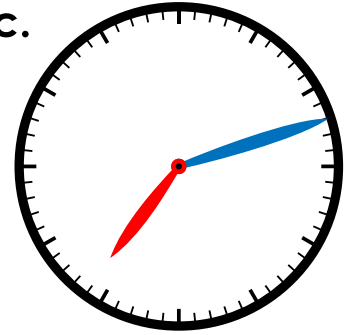
a.



b.



c.



Preview

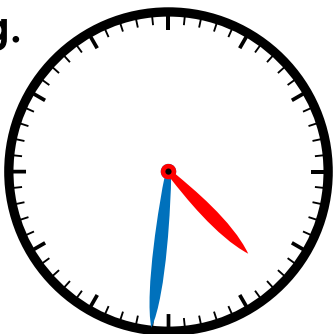
Please log in to download
the printable version of this worksheet.

_____ : _____


_____ : _____

_____ : _____

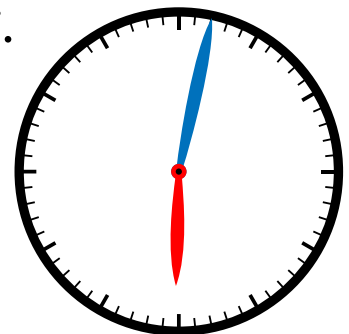
g.



h.



i.



_____ : _____

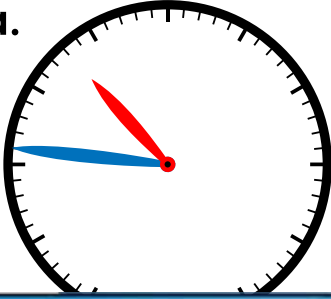
_____ : _____

_____ : _____

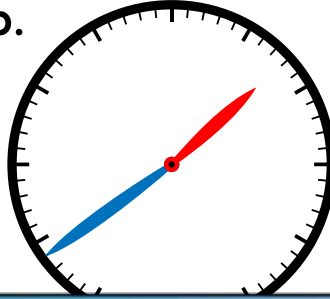
Telling Time

Write the time shown on each clock.

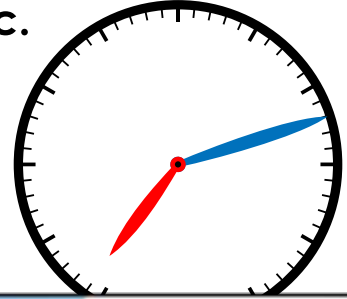
a.



b.



c.



Preview

Please log in to download
the printable version of this worksheet.

