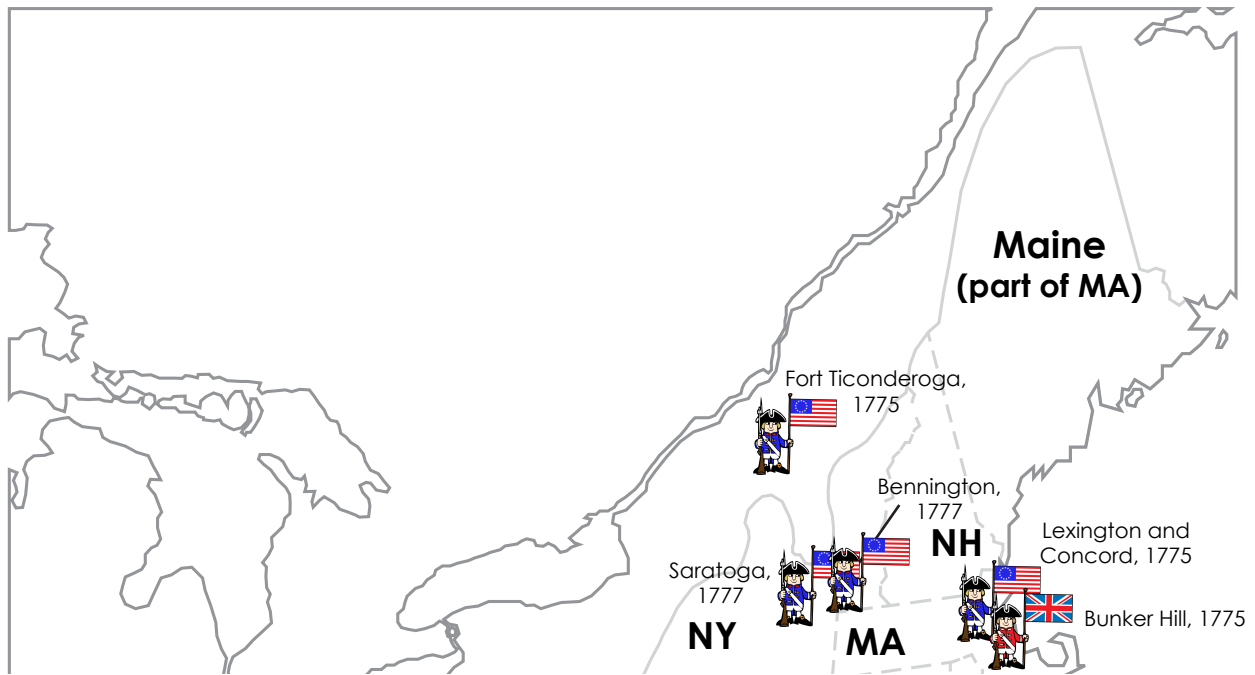
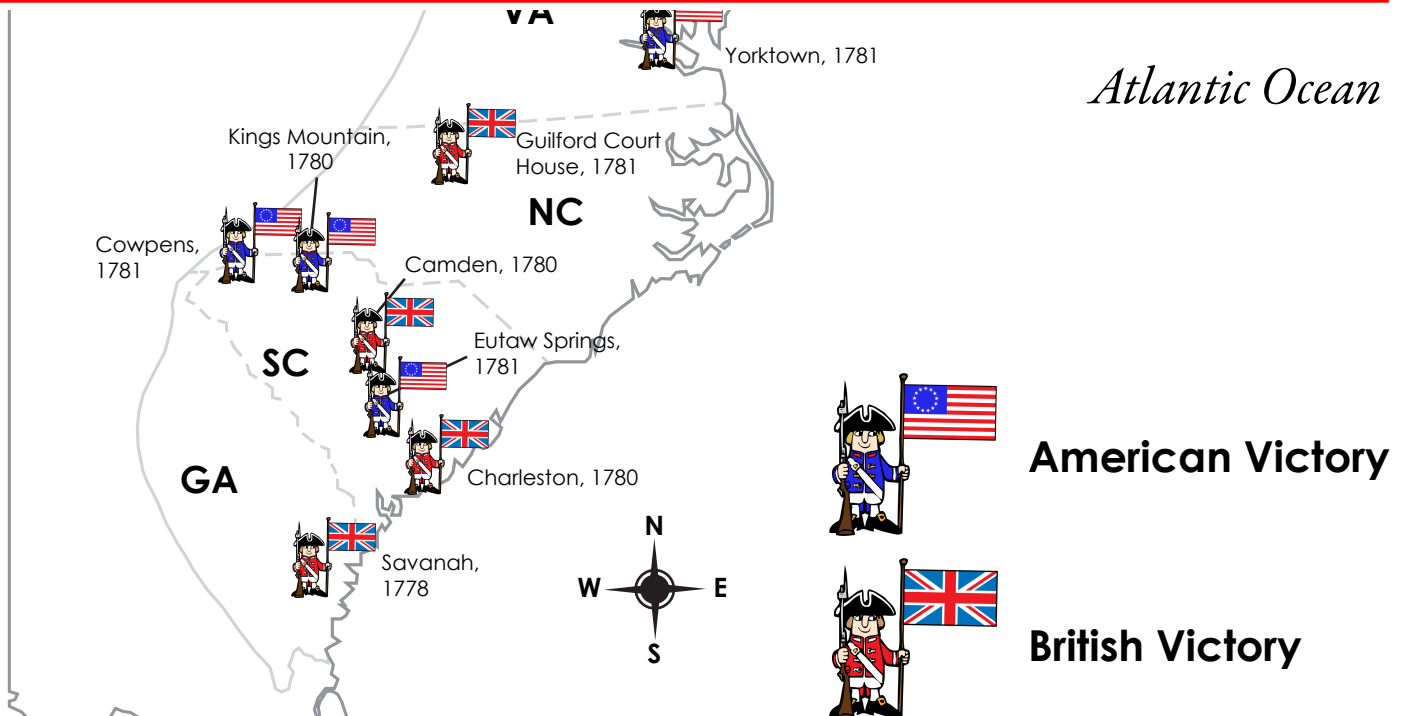


Battles of the American Revolution




~ PREVIEW ~

Please log in or register to download the printable version of this worksheet.



Name: _____



Battles of the American Revolution

Use the map to answer the questions.

1. Who won the Battle of Bunker Hill? _____
2. In what year was the Battle of Charleston? _____
3. Where was the northernmost battle of shown on the map? _____
4. Where was the southernmost battle of shown on the map? _____




~ PREVIEW ~

Please log in or register to download the printable version of this worksheet.

8. Which five states did not have a battle during the American Revolutionary War?
_____, _____, _____,
_____, and _____.
9. Which three states each had only one battle during the American Revolutionary War?
_____, _____, and
_____.
10. The last battle of the American Revolution was fought in Virginia. Where was this battle? _____

ANSWER KEY



Battles of the American Revolution

Use the map to answer the questions.

1. Who won the Battle of Bunker Hill?

the British

2. In what year was the Battle of Charleston?

1780

3. Where was the northernmost battle of shown on the map?

Fort Ticonderoga

4. Where was the southernmost battle of shown on the map?

Savannah



~ PREVIEW ~

Please log in or register to download the printable version of this worksheet.

8. Which four states did not have a battle during the American Revolutionary War?

New Hampshire , **Connecticut** , **Delaware** ,

Rhode Island , and **Maryland** .

9. Which three states each had only one battle during the American Revolutionary War?

Virginia , **North Carolina** , and

Georgia .

10. The last battle of the American Revolution was fought in Virginia. Where was this battle?

Yorktown