



Name: \_\_\_\_\_

## Number Bonds

Use addition and subtraction to fill in the missing number of each number bond.



a.




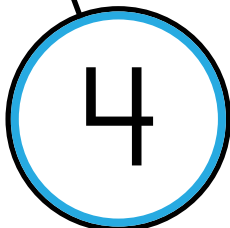
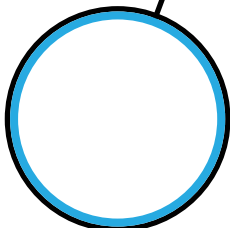


b.



c.




**Preview**  
Please log in to download  
the printable version of this worksheet.



# ANSWER KEY

## Number Bonds



Use addition and subtraction to fill in the missing number of each number bond.

a.

b.

c.

# Preview

Please log in to download  
the printable version of this worksheet.

