


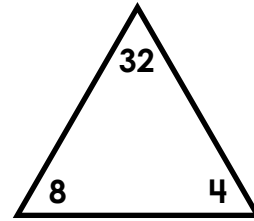
1. Multiply by 8s

What multiplication fact is shown by the array?



2. Multiply by 8s

Write two multiplication facts using the numbers in the triangle.



_____ × _____ = _____



Preview


Please log in to download the printable version of this worksheet.

Rewrite the addition expression as a multiplication fact.

$$9 + 9 + 9 + 9 + 9 + 9 + 9 + 9 + 9 + 9$$

_____ × _____ = _____


What multiplication fact is shown by the groups?



_____ × _____ = _____

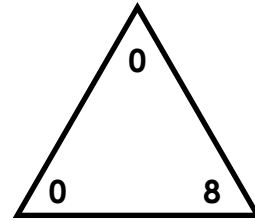
5. Multiply by 8s

What multiplication fact is shown by the array?



6. Multiply by 8s

Write two multiplication facts using the numbers in the triangle.



$$\underline{\quad} \times \underline{\quad} = \underline{\quad}$$



Preview


Please log in to download the printable version of this worksheet.

Rewrite the addition expression as a multiplication fact.

$$6 + 6 + 6 + 6 + 6 + 6 + 6 + 6$$

$$\underline{\quad} \times \underline{\quad} = \underline{\quad}$$


What multiplication fact is shown by the groups?



$$\underline{\quad} \times \underline{\quad} = \underline{\quad}$$

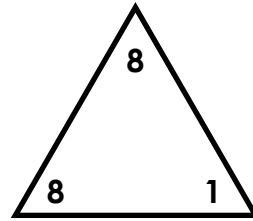
9. Multiply by 8s

What multiplication fact is shown by the array?



10. Multiply by 8s

Write two multiplication facts using the numbers in the triangle.



$$\underline{\quad} \times \underline{\quad} = \underline{\quad}$$



Preview


Please log in to download the printable version of this worksheet.

Rewrite the addition expression as a multiplication fact.

$$4 + 4 + 4 + 4 + 4 + 4 + 4 + 4 + 4 + 4$$

$$\underline{\quad} \times \underline{\quad} = \underline{\quad}$$


What multiplication fact is shown by the groups?



$$\underline{\quad} \times \underline{\quad} = \underline{\quad}$$

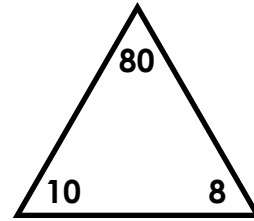
13. Multiply by 8s

What multiplication fact is shown by the array?




14. Multiply by 8s

Write two multiplication facts using the numbers in the triangle.



_____ × _____ = _____



Preview


Please log in to download the printable version of this worksheet.

Rewrite the addition expression as a multiplication fact.

$$1 + 1 + 1 + 1 + 1 + 1 + 1 + 1 + 1$$

_____ × _____ = _____


What multiplication fact is shown by the groups?



_____ × _____ = _____

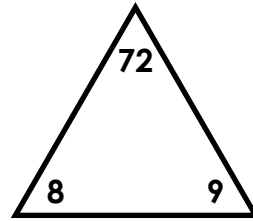
17. Multiply by 8s

What multiplication fact is shown by the array?



18. Multiply by 8s

Write two multiplication facts using the numbers in the triangle.



$$\underline{\quad} \times \underline{\quad} = \underline{\quad}$$



Preview


Please log in to download the printable version of this worksheet.

Rewrite the addition expression as a multiplication fact.

$$2 + 2 + 2 + 2 + 2 + 2 + 2 + 2$$

$$\underline{\quad} \times \underline{\quad} = \underline{\quad}$$


What multiplication fact is shown by the groups?



$$\underline{\quad} \times \underline{\quad} = \underline{\quad}$$

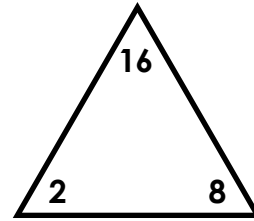
21. Multiply by 8s

What multiplication fact is shown by the array?




22. Multiply by 8s

Write two multiplication facts using the numbers in the triangle.



$$\underline{\quad} \times \underline{\quad} = \underline{\quad}$$



Preview


Please log in to download the printable version of this worksheet.

Rewrite the addition expression as a multiplication fact.

$$\begin{array}{r} 8 + 8 + 8 + 8 \\ + 8 + 8 + 8 + 8 \end{array}$$

$$\underline{\quad} \times \underline{\quad} = \underline{\quad}$$

What multiplication fact is shown by the groups?



$$\underline{\quad} \times \underline{\quad} = \underline{\quad}$$

Name: _____

Task Cards: Multiply by 8s

1. _____

13. _____

2a. _____

14a. _____

2b. _____

14b. _____

3. _____

15. _____

4. _____

16. _____



Preview

Please log in to download
the printable version of this worksheet.

7. _____

19. _____

8. _____

20. _____

9. _____

21. _____

10a. _____

22a. _____

10b. _____

22b. _____

11. _____

23. _____

12. _____

24. _____

ANSWER KEY

Task Cards: Multiply by 8s

1. $8 \times 5 = 40$

13. $8 \times 3 = 24$

2a. $8 \times 4 = 32$

14a. $8 \times 10 = 80$

Preview

Please log in to download
the printable version of this worksheet.



11. $8 \times 4 = 32$

23. $8 \times 8 = 64$

12. $8 \times 6 = 48$

24. $8 \times 3 = 24$