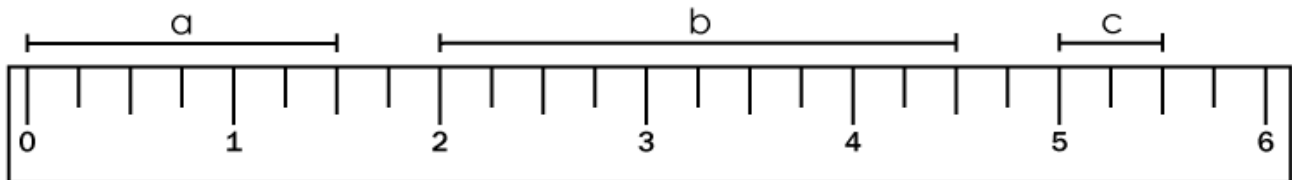


Name: \_\_\_\_\_

## Measuring With a Ruler

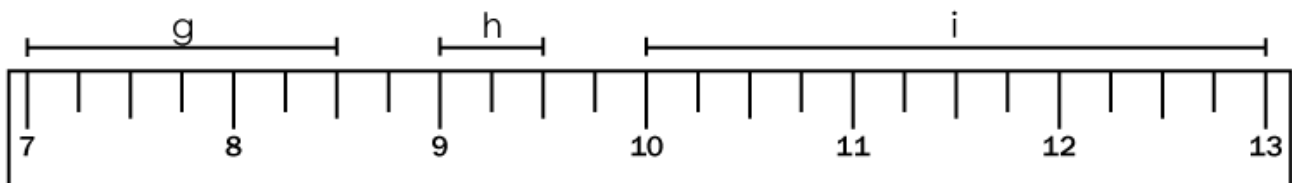
Measure to the nearest  $\frac{1}{2}$  inch for each line segment using the ruler shown.



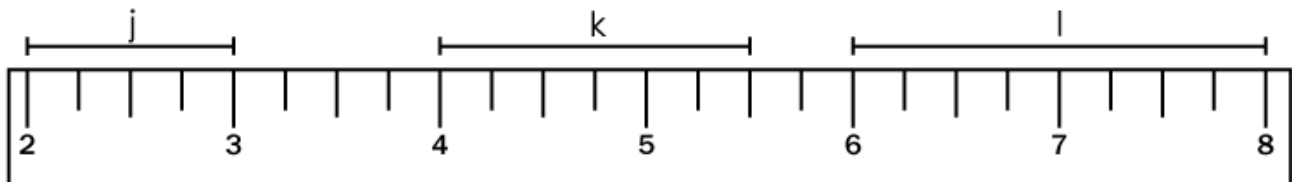
a = \_\_\_\_\_ b = \_\_\_\_\_ c = \_\_\_\_\_



d = \_\_\_\_\_



g = \_\_\_\_\_ h = \_\_\_\_\_ i = \_\_\_\_\_

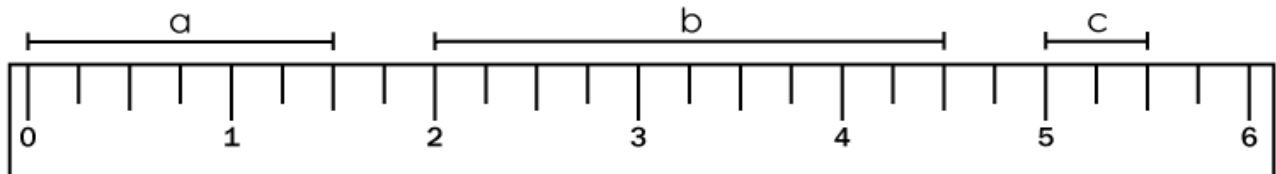


j = \_\_\_\_\_ k = \_\_\_\_\_ l = \_\_\_\_\_

# ANSWER KEY

## Measuring With a Ruler

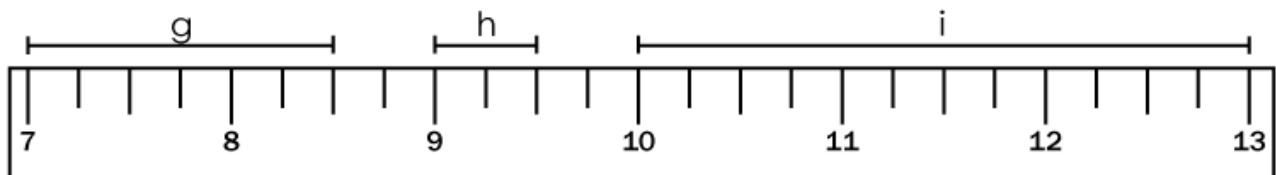
Measure to the nearest  $\frac{1}{2}$  inch for each line segment using the ruler shown.



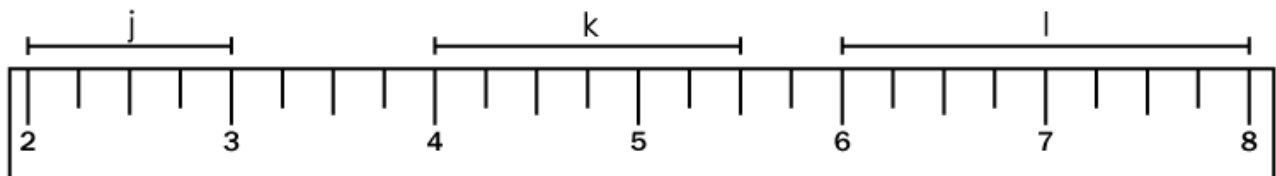
a =  $1\frac{1}{2}$  inches      b =  $2\frac{1}{2}$  inches      c =  $\frac{1}{2}$  inch



d =           



g =  $1\frac{1}{2}$  inches      h =  $\frac{1}{2}$  inch      i = 3 inches



j = 1 inches      k =  $1\frac{1}{2}$  inches      l = 2 inches