
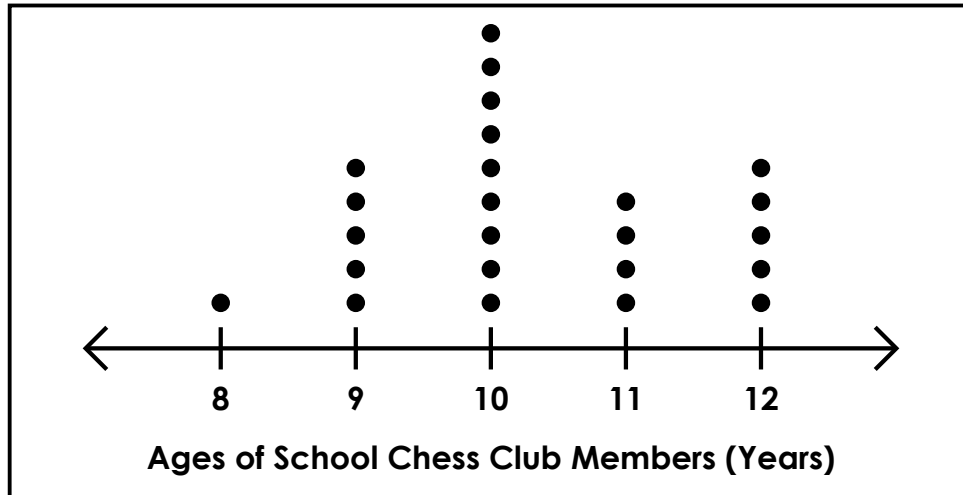



Name: \_\_\_\_\_

## Reading Line Plots



# ~ PREVIEW ~

Please log in or register to download the printable version of this worksheet.

4. A teacher divides the Chess Club into three teams.

**The Pawns:** Under 10 years old.  
**The Knights:** 10 years old.  
**The Rooks:** Over 10 years old.

How many members are on each team?

---


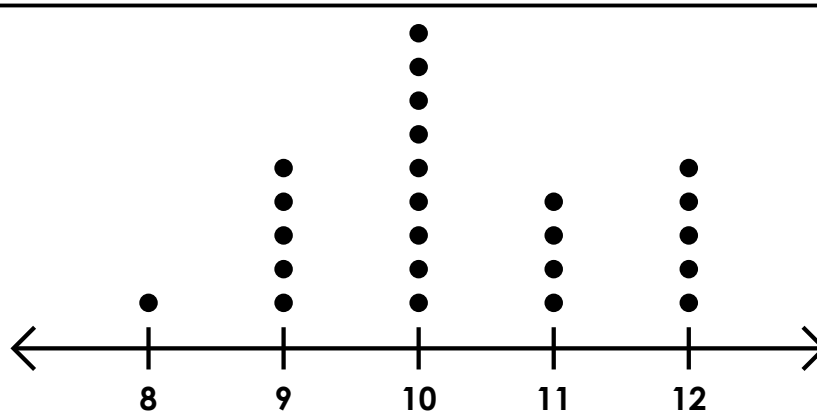

---

5. How many total kids are Chess Club members? \_\_\_\_\_

6. If two more 12-year-olds and half a dozen more 9-year-olds joined the club, how many players would there be in all? \_\_\_\_\_

# ANSWER KEY

## Reading Line Plots



Ages of School Chess Club Members (Years)



# ~ PREVIEW ~

Please log in or register to download the printable version of this worksheet.