

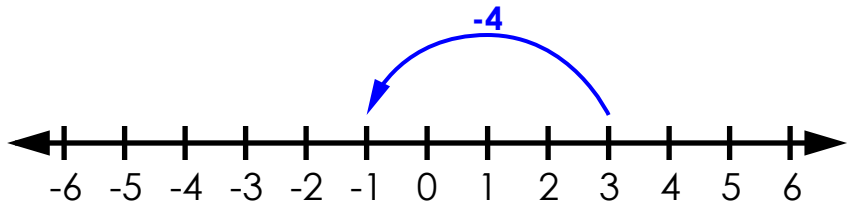
Name: _____

Subtracting Integers

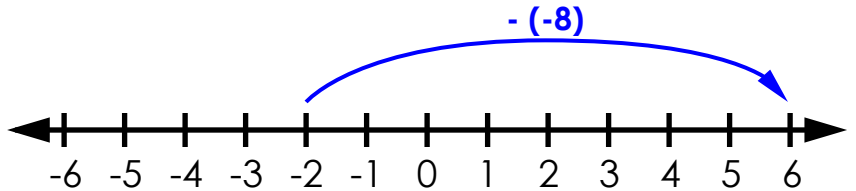
Use the number lines to solve.

examples:

$$3 - 4 = \underline{-1}$$

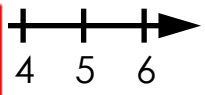


$$-2 - (-8) = \underline{6}$$

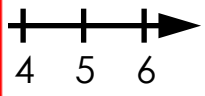


a. $-6 - (-1) =$ _____

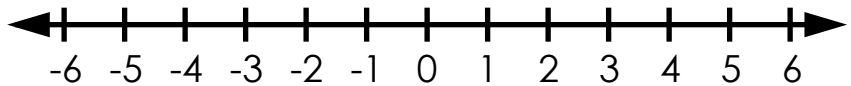
PREVIEW
Please log in or register to download the printable version of this worksheet.



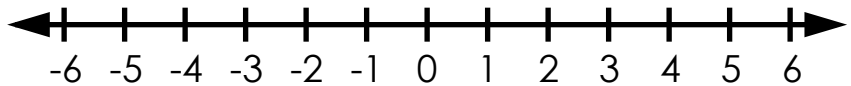
b. $1 - (-2) =$ _____



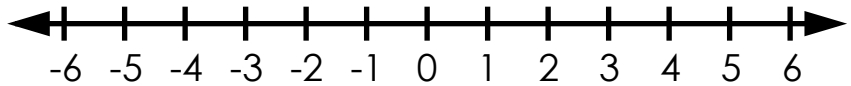
c. $0 - 3 =$ _____



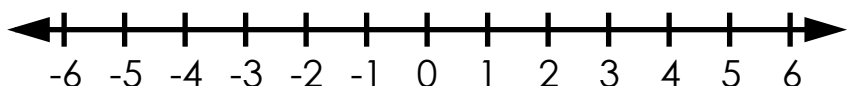
d. $-3 - (-9) =$ _____



e. $-2 - (-2) =$ _____



f. $3 - 8 =$ _____



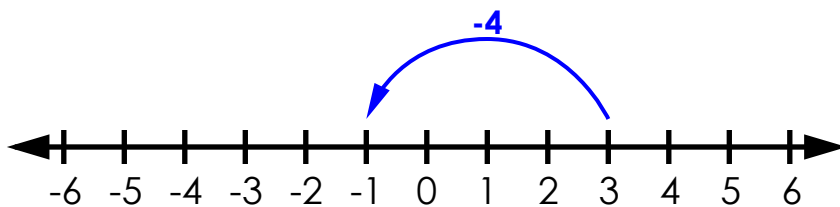
ANSWER KEY

Subtracting Integers

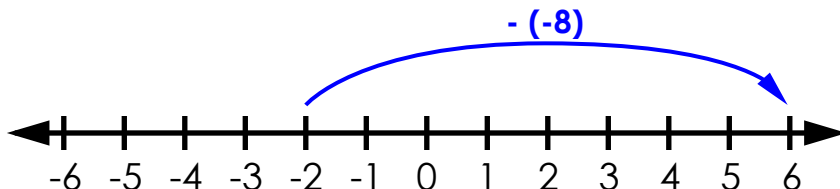
Use the number lines to solve.

examples:

$$3 - 4 = \underline{-1}$$



$$-2 - (-8) = \underline{6}$$

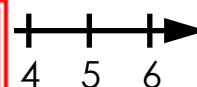


a. $-6 - (-)$

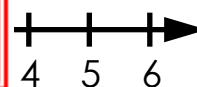


PREVIEW

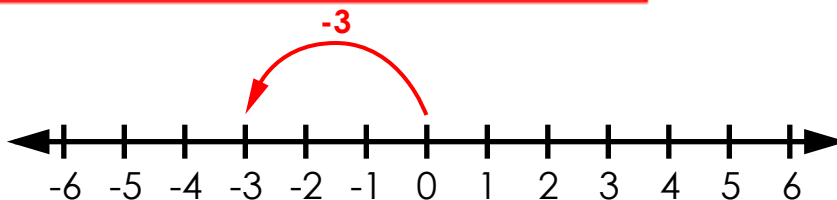
Please log in or register to download the printable version of this worksheet.



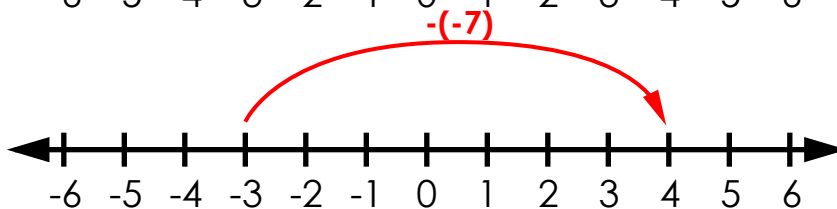
b. $1 - (-2)$



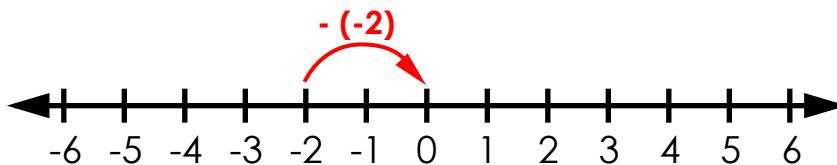
c. $0 - 3 = \underline{-3}$



d. $-3 - (-7) = \underline{4}$



e. $-2 - (-2) = \underline{0}$



f. $3 - 8 = \underline{-5}$

