

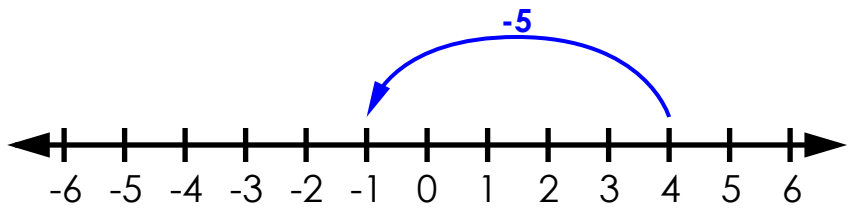
Name: _____

Adding Integers

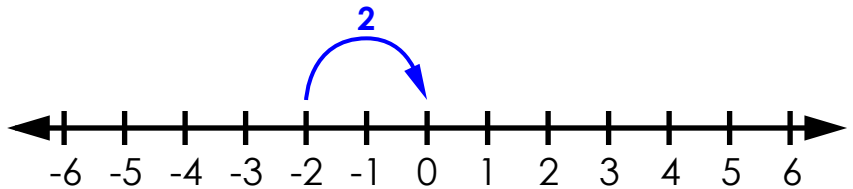
Use the number lines to solve.

examples:

$$4 + (-5) = \underline{-1}$$

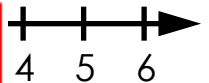


$$-2 + 2 = \underline{0}$$

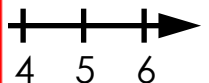


a. $-3 + 7 =$ _____

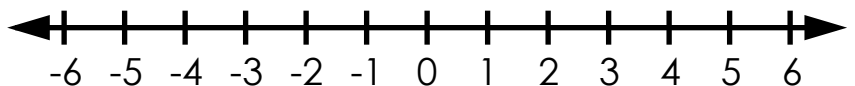
PREVIEW
Please log in or register to download the printable version of this worksheet.



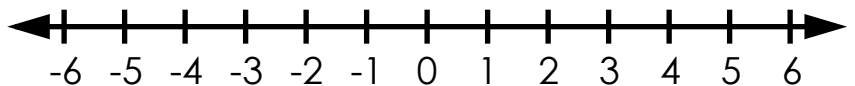
b. $2 + (-5) =$ _____



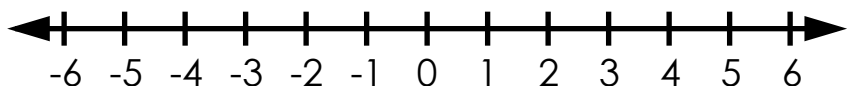
c. $-1 + (-2) =$ _____



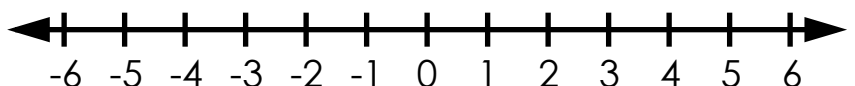
d. $6 + (-4) =$ _____



e. $-6 + 12 =$ _____



f. $0 + (-1) =$ _____



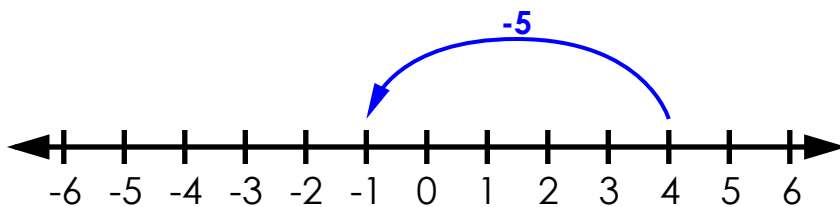
ANSWER KEY

Adding Integers

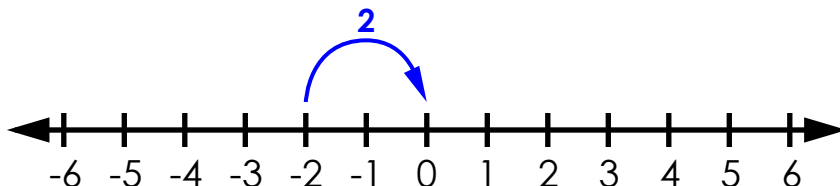
Use the number lines to solve.

examples:

$$4 + (-5) = \underline{-1}$$



$$-2 + 2 = \underline{0}$$

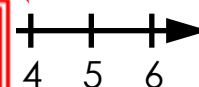


a. $-3 + 7 =$ _____

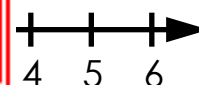


PREVIEW

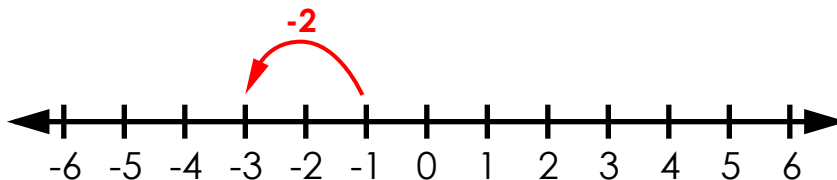
Please log in or register to download the printable version of this worksheet.



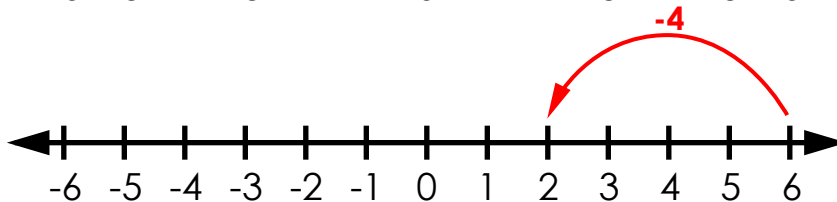
b. $2 + (-4) =$ _____



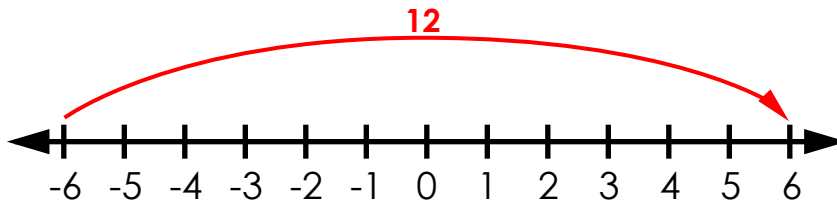
c. $-1 + (-2) = \underline{-3}$



d. $6 + (-4) = \underline{2}$



e. $-6 + 12 = \underline{6}$



f. $0 + (-1) = \underline{-1}$

