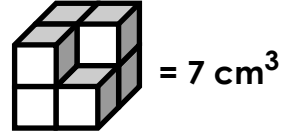


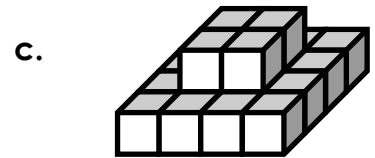

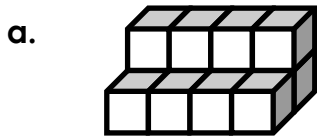
Name: _____

Volume Cubes

Volume is the measure of space inside a solid object, such as a cube or rectangular prism. Volume is measured in **cubic units**.



Find the volume of each shape. Use cubic centimeters (cm³) for your units.

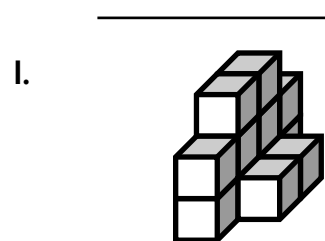
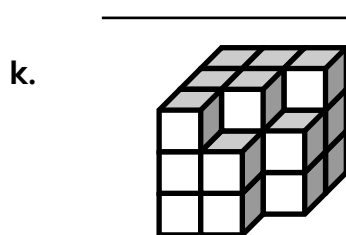

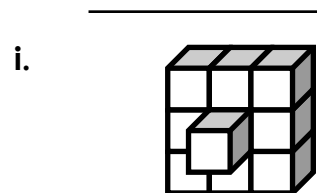
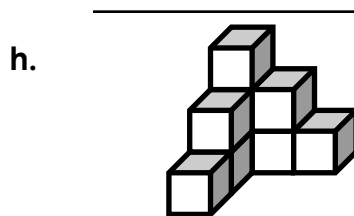
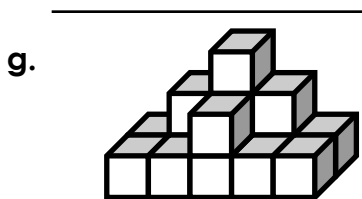


d.  



PREVIEW

Please log in or register to download the printable version of this worksheet.

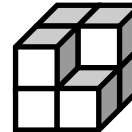


ANSWER KEY

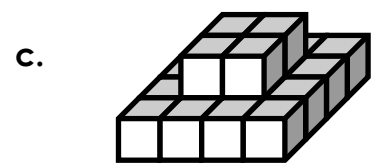

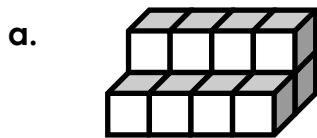
Volume Cubes

Volume is the measure of space inside a solid object, such as a cube or rectangular prism. Volume is measured in **cubic units**.

 = 1 cubic cm or 1 cm³

 = 7 cm³

Find the volume of each shape. Use cubic centimeters (cm³) for your units.



d.  m³



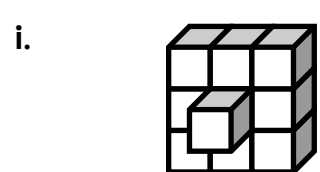


PREVIEW

Please log in or register to download the printable version of this worksheet.

12 cm³

24 cm³




14 cm³



15 cm³

9 cm³

10 cm³



13 cm³

22 cm³

12 cm³