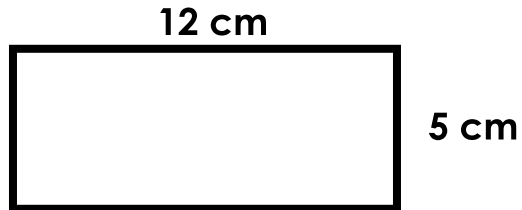


Name: _____

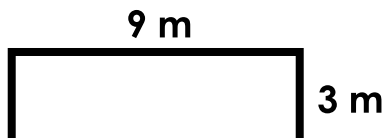
Area and Perimeter of Rectangles

Find the area and perimeter of each rectangle.



perimeter = _____

area = _____

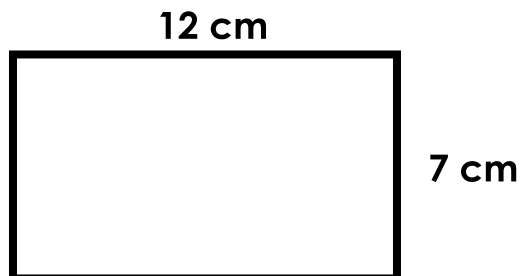


perimeter = _____



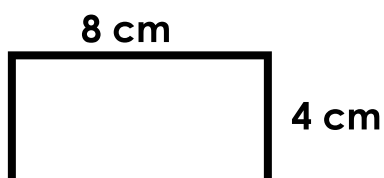
Preview

Please log in to download
the printable version of this worksheet.



perimeter = _____

area = _____



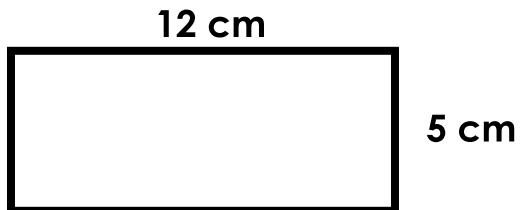
perimeter = _____

area = _____

ANSWER KEY

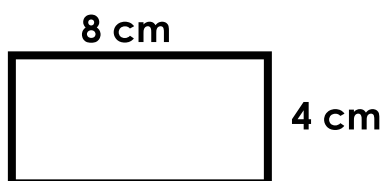
Area and Perimeter of Rectangles

Find the area and perimeter of each rectangle.



perimeter = 34 cm

area = 60 sq. cm



perimeter = 24 cm

area = 32 sq. cm