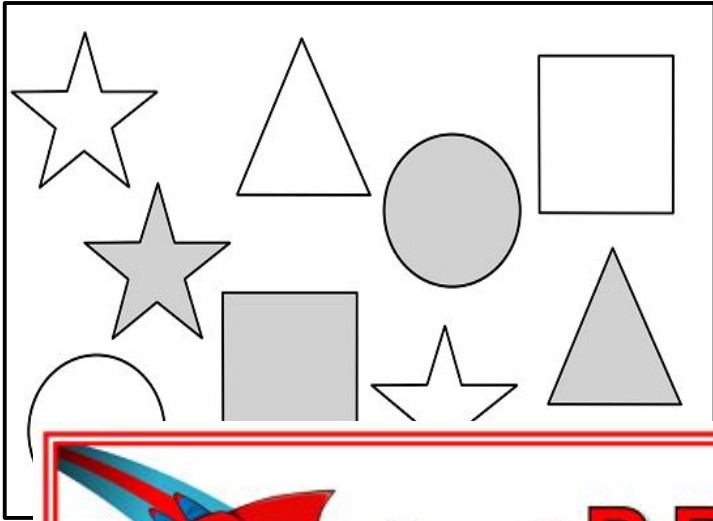


Name: _____

Fractions of a Set



1. What fraction of the shapes are triangles? _____
2. What fraction of the stars are gray? _____
3. What fraction of the circles are _____


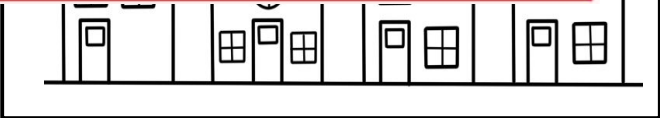
4.



~ PREVIEW ~

Please log in or register to download the printable version of this worksheet.

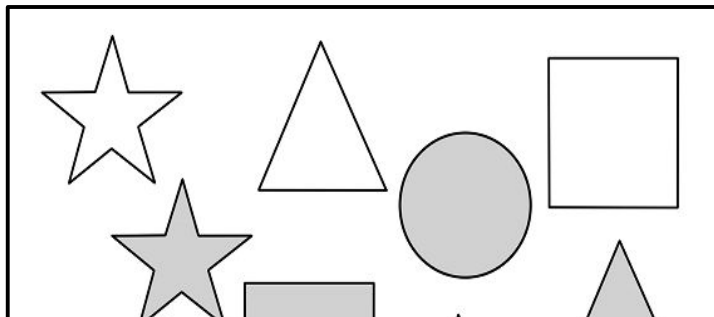
5. What fraction of the houses have two or more windows? _____



6. What fraction of the crayons are broken? _____
7. What fraction of the crayons are yellow? _____
8. What fraction of the pink crayons are broken? _____

ANSWER KEY

Fractions of a Set



1. What fraction of the shapes are triangles? **2/9**
2. What fraction of the stars are gray? **1/3**

4

5



~ PREVIEW ~

Please log in or register to download the printable version of this worksheet.