

Name: _____

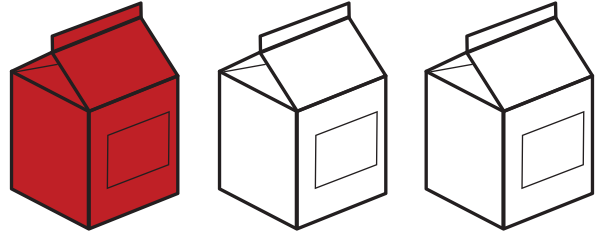
Fraction of a Group

Write the fraction of the shaded area in each group.

a.




b.




Preview

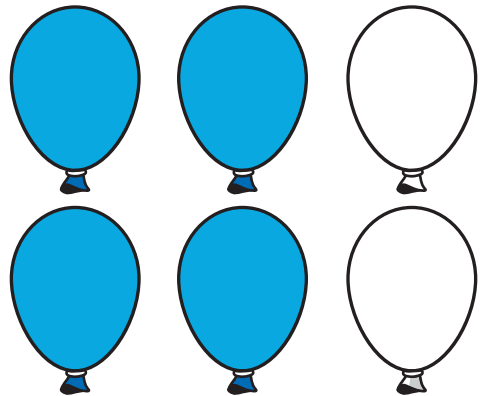
Please log in to download
the printable version of this worksheet.



e.



f.



ANSWER KEY

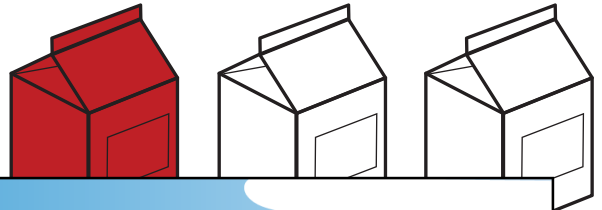
Fraction of a Group

Write the fraction of the shaded area in each group.

a.



b.



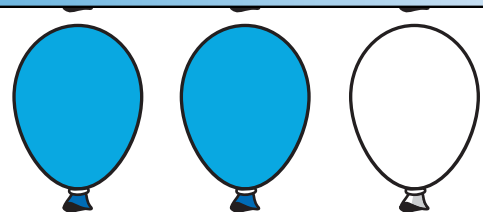
c.



e.



$$\frac{1}{6}$$



$$\frac{4}{6}$$