

Name: \_\_\_\_\_

**K-66**

Largest &  
Smallest Value

## Daily Word Problem

4

9

8



# Preview

Please log in to download  
the printable version of this worksheet.

Which number has  
the greatest value? \_\_\_\_\_

Which number has  
the least value? \_\_\_\_\_


Name: \_\_\_\_\_

K-67

Subtraction  
within 10

## Daily Word Problem

I see



# Preview

Please log in to download  
the printable version of this worksheet.

How many  s are left? \_\_\_\_\_

\_\_\_\_\_ - \_\_\_\_\_ = \_\_\_\_\_

Name: \_\_\_\_\_

**K-68**

Comparing  
(Largest/Smallest)

## Daily Word Problem

Bus



# Preview

Please log in to download  
the printable version of this worksheet.

Which is the longest? \_\_\_\_\_

Which is the shortest? \_\_\_\_\_



Name: \_\_\_\_\_

**K-69**

Identifying  
Basic Shapes

## Daily Word Problem


Color in the circle.



# Preview

Please log in to download  
the printable version of this worksheet.

Color in the square.





Name: \_\_\_\_\_

**K-70**

Comparing  
(Fewest/Most)

## Daily Word Problem

How many pencils are on each desk?



# Preview

Please log in to download  
the printable version of this worksheet.

Circle the desk that has more pencils.