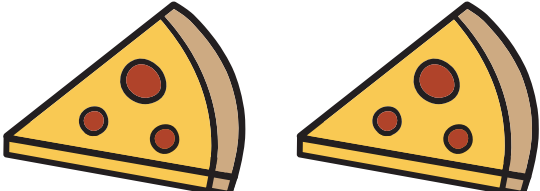


Name: \_\_\_\_\_

**K-31**

Addition to 5

## Daily Word Problem

I ate  .



# Preview

Please log in to download  
the printable version of this worksheet.

How many  s  
did we eat in all? \_\_\_\_\_


\_\_\_\_\_ + \_\_\_\_\_ = \_\_\_\_\_

Name: \_\_\_\_\_

**K-32**


Addition to 10

## Daily Word Problem



# Preview

Please log in to download  
the printable version of this worksheet.

How many **yellow** s are there? \_\_\_\_\_


How many s are there in all? \_\_\_\_\_

Name: \_\_\_\_\_

**K-33**

Identifying  
Basic Shapes

## Daily Word Problem



# Preview

Please log in to download  
the printable version of this worksheet.

How many sides  
does this shape have? \_\_\_\_\_

What shape is this? \_\_\_\_\_


Name: \_\_\_\_\_

**K-34**

Addition to 10

## Daily Word Problem

Ann has



# Preview

Please log in to download  
the printable version of this worksheet.

How many  s  
do they have in all? \_\_\_\_\_

\_\_\_\_\_ + \_\_\_\_\_ = \_\_\_\_\_


Name: \_\_\_\_\_

**K-35**

Skip Counting by 10s;  
Place Value

## Daily Word Problem

Each bundle has 10 sticks.



# Preview

Please log in to download  
the printable version of this worksheet.

How many  
sticks are shown? \_\_\_\_\_