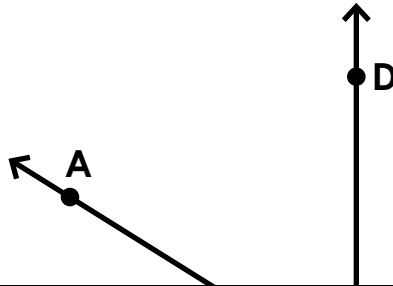


Name: \_\_\_\_\_

**Daily Word Problem**

Angle ABC measures  $32^\circ$ . How many degrees does angle ABD need to be in order to make angle DBC a right angle?



# Preview

Please log in to download  
the printable version of this worksheet.

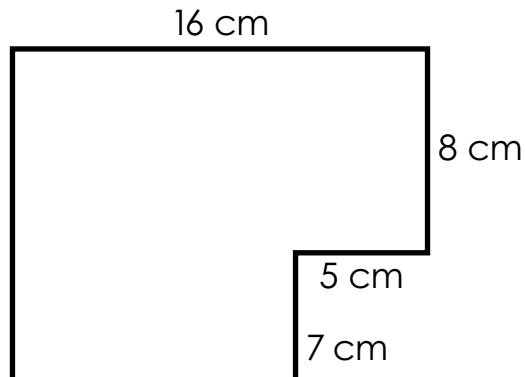


answer: \_\_\_\_\_

Name: \_\_\_\_\_

**Daily Word Problem**

Find the area and perimeter of the shape below.




**Preview**

Please log in to download  
the printable version of this worksheet.

area: \_\_\_\_\_

perimeter: \_\_\_\_\_



Name: \_\_\_\_\_

## Daily Word Problem

Danielle says that the figure below is a line segment.  
Ryan says that the figure below is a ray. Who is correct?



# Preview

Please log in to download  
the printable version of this worksheet.



Name: \_\_\_\_\_

**D-134**

Operations with  
Fractions

**Single-  
Step**

## Daily Word Problem

Lena is making cookies.

She uses  $\frac{3}{4}$  of a cup of flour in each batch of cookies.

She makes 6 batches of cookies.

How much flour will she use?

*Show your work.*

*Write your answer as a mixed number.*



# Preview

Please log in to download  
the printable version of this worksheet.

answer: \_\_\_\_\_



Name: \_\_\_\_\_

**Daily Word Problem**

Zaza walked  $\frac{4}{5}$  of a mile to school.  
What is this distance as a decimal?

Show your work.



answer: \_\_\_\_\_

Daily Word Problem

# Preview

Please log in to download  
the printable version of this worksheet.

