


Name: \_\_\_\_\_

## Daily Word Problem

The graph below shows the number of games won by each member of the East Lake Checkers Club.

### Checkers Club




# Preview

Please log in to download the printable version of this worksheet.

How many games were played in all? \_\_\_\_\_

What fraction of the games did Steve win? \_\_\_\_\_

Show your work.



Name: \_\_\_\_\_

## Daily Word Problem

Doggie chew sticks come in boxes of 20. Chris buys 3 boxes. He shares them equally among 6 dogs. How many chew sticks will each dog get?


Show your work.



# Preview

Please log in to download the printable version of this worksheet.

answer: \_\_\_\_\_



Name: \_\_\_\_\_

**Daily Word Problem**

Picnic Supplies		
Item	Number in a Pack	Cost
Forks	20	\$9
Plates	8	\$7
Napkins	25	\$6



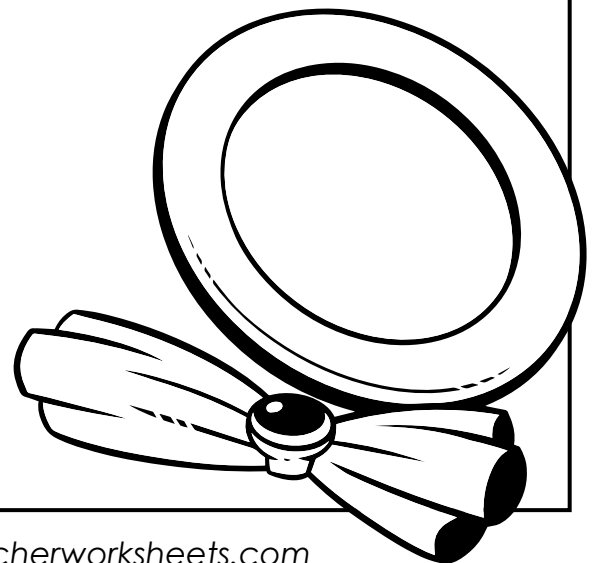
# Preview

Please log in to download  
the printable version of this worksheet.

How many packs of napkins will we need? \_\_\_\_\_

What will the total cost  
for the plates and napkins be? \_\_\_\_\_

Show your work.



Name: \_\_\_\_\_

**C-74**

Addition &  
Subtraction

**Multi-  
Step**

## Daily Word Problem

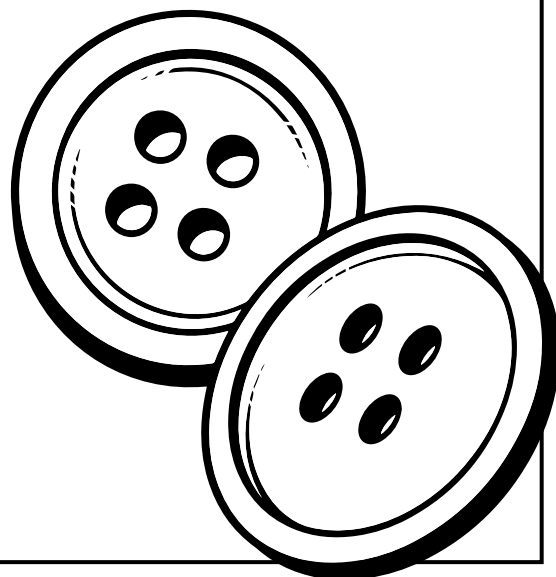
Cora and José collect buttons. Cora has 345 buttons in her collection. José has 120 fewer buttons than Cora. How many buttons do they have altogether?

*Show your work.*



# Preview

Please log in to download  
the printable version of this worksheet.



answer: \_\_\_\_\_

Name: \_\_\_\_\_

**C-75**

Operations

Single-  
Step

## Daily Word Problem

Soledad bakes 48 cupcakes. Each of his baking trays holds 6 cupcakes. How many trays of cupcakes did Soledad bake?

Show your work.



# Preview

Please log in to download  
the printable version of this worksheet.



answer: \_\_\_\_\_

Daily Word Problem

# Preview

Please log in to download  
the printable version of this worksheet.

