

Name: _____

B-36

Addition &
Subtraction

**Single-
Step**

Daily Word Problem

Valentina collects stamps.

If she collects 10 more, she will have 22 stamps in all.

How many stamps does Valentina have now?


Show your work.



Preview

Please log in to download
the printable version of this worksheet.

answer: _____



Name: _____

B-37

Addition &
Subtraction

**Multi-
Step**

Daily Word Problem

Parker played outside for 12 minutes.

He rode his bike for 5 minutes.

He played with his dog for 3 minutes.

The rest of the time, he played with a ball.


How many minutes did Parker spend playing with the ball?



Preview

Please log in to download
the printable version of this worksheet.

answer: _____



Name: _____

B-38

Addition &
Subtraction

**Single-
Step**

Daily Word Problem

Cora and Luna were playing air hockey.

Cora scored 5 points.

Cora and Luna together scored 14 points.

How many points did Luna score?


Show your work.



Preview

Please log in to download
the printable version of this worksheet.

answer: _____



Name: _____

B-39

Addition &
Subtraction

**Multi-
Step**

Daily Word Problem

There are 17 peaches in a tree.

You pick 7.

7 more peaches fall off of the tree.

How many peaches are left on the tree?


Show your work.



Preview

Please log in to download
the printable version of this worksheet.

answer: _____



Name: _____

B-40

Place Value:
Tens and Ones

**Multi-
Step**

Daily Word Problem

I am thinking of a secret number.

The digit in the ones place is 2 more than 3.

The digit in the tens place is less than 5 but more than 3.


What is the secret number?



Preview

Please log in to download
the printable version of this worksheet.

answer: _____



Daily Word Problem

Preview

Please log in to download
the printable version of this worksheet.

