

Name: _____

Daily Word Problem

The table below shows Jude's schedule after school.

Schedule	
3:30 p.m.	Snack
4:30 p.m.	Homework



Preview

Please log in to download
the printable version of this worksheet.

Show your work.

answer: _____



Name: _____

B-142

Operations with
Money

**Single-
Step**

Daily Word Problem

Nila has five coins in her piggy bank.
If she has 70 cents total, what coins does she
have?


Show your work.



Preview

Please log in to download
the printable version of this worksheet.

answer: _____



Name: _____

Daily Word Problem

The Bobcats Football Team is having a push-up competition. The chart below shows the number of push-ups each player did.

Number of Push-ups	
Kai	52




Preview

Please log in to download
the printable version of this worksheet.

Who did the least push-ups?

What is the difference?

Show your work.



Name: _____

Daily Word Problem

Diego is 132 centimeters tall.

His sister, Ana, is 170 centimeters tall.

Who is taller? _____


How much taller? _____

Show your work



Preview

Please log in to download
the printable version of this worksheet.



Name: _____

B-145

Repeated Addition
or Multiplication

**Multi-
Step**

Daily Word Problem

Bai bought four muffins for \$2 each.
She also bought two sandwiches for \$6 each.
She also bought one drink for \$3.
How much money did Bai spend altogether?


Show your work.



Preview

Please log in to download
the printable version of this worksheet.

answer: _____



Daily Word Problem

Preview

Please log in to download
the printable version of this worksheet.

