

Name: \_\_\_\_\_



# Math Buzz



10 stars in 2 equal groups.

\_\_\_\_\_ stars in each group.

$$10 \div 2 = \underline{\quad}$$

Multiply.

$$4 \times 3 = \underline{\quad}$$

Solve.

$$2,039 + 3,978 =$$

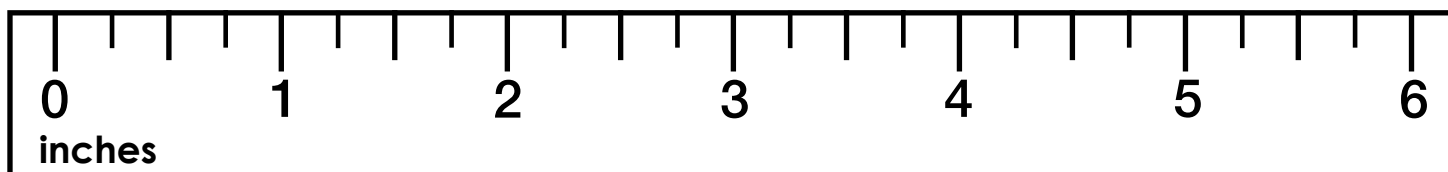
Mrs. Fischer bought 4 gallons of milk. If one gallon equals 8 pints,



# Preview


Please log in to download the printable version of this worksheet.

# Quinn



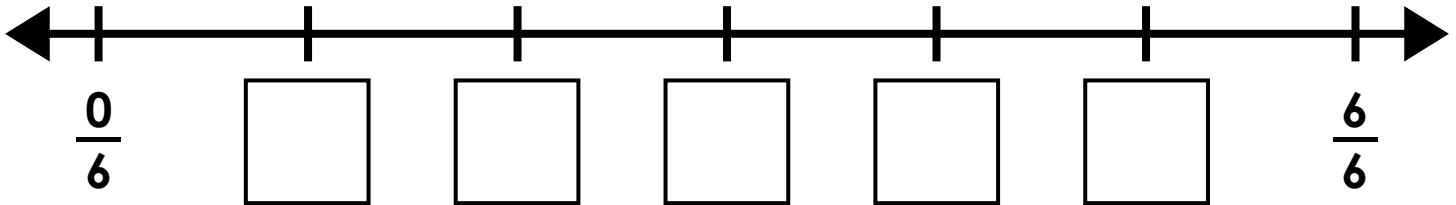
answer: \_\_\_\_\_ inches

Name: \_\_\_\_\_



# Math Buzz

Label the fractions on the number line.



The large hill at Chestnut Ridge Park had 8 more people climbing than the small hill. There were

Complete the table.



# Preview

Please log in to download the printable version of this worksheet.

Fill in the missing numbers.

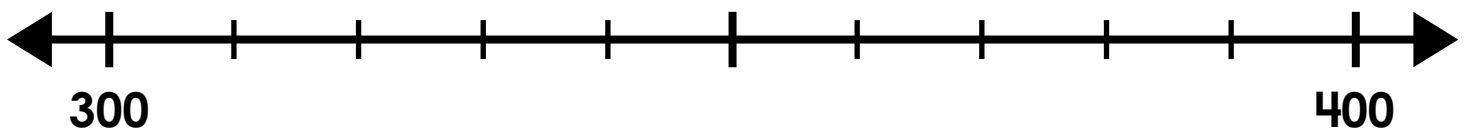
$6 \times \square = 42$

$7 \times \square = 42$

10	
----	--

Rule: Multiply by 6

Round to the **nearest hundred** using the number line.




Label **360** on the number line.

Which is closer to 360? **300** or **400**

360 rounded to the nearest hundred is \_\_\_\_\_.

Name: \_\_\_\_\_



# Math Buzz




Multiply.

$$\begin{array}{r} 9 \\ \times 0 \\ \hline \end{array}$$

$$\begin{array}{r} 6 \\ \times 4 \\ \hline \end{array}$$

$$\begin{array}{r} 7 \\ \times 6 \\ \hline \end{array}$$

$$\begin{array}{r} 10 \\ \times 8 \\ \hline \end{array}$$



9 triangles in 3 equal groups.

\_\_\_\_\_ triangles in each group.

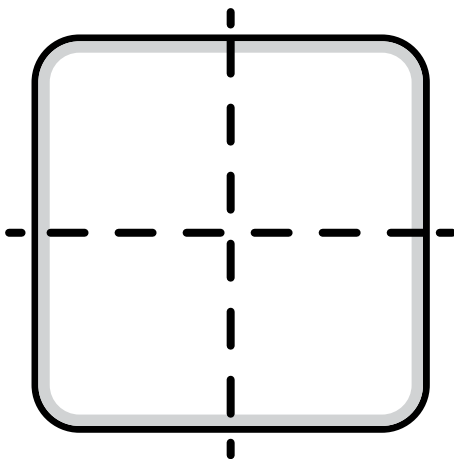
$$9 \div 3 = \underline{\quad}$$



# Preview

Please log in to download  
the printable version of this worksheet.

pieces. What fraction of the sandwich did  
Aiden have left? **Show your work**




Aiden had \_\_\_\_\_ of his sandwich left.



open


closed



open

closed

Name: \_\_\_\_\_



# Math Buzz

Sophia finished cleaning her room in 25 minutes. It took her brother 15 minutes longer to finish cleaning his room. If they both started cleaning at 1:00, what time did Sophia's brother finish cleaning his room?



Complete the table.

Fill in the missing number.

Input	7	9	9	10
-------	---	---	---	----

_____	_____	70
-------	-------	----



# Preview

Please log in to download the printable version of this worksheet.

583

576

585

582

575

Find the perimeter of the rectangle.

9 yds

7 yds

7 yds

9 yds

Perimeter = \_\_\_\_\_ yards

Name: \_\_\_\_\_



# Math Buzz


Solve.

Find the product  
of 10 and 4.

\_\_\_\_\_

Multiply 3 by 8.

\_\_\_\_\_



15 hearts in 5 equal groups.

\_\_\_\_\_ hearts in each group.

$$15 \div 5 = \underline{\hspace{2cm}}$$



## Preview

Please log in to download  
the printable version of this worksheet.

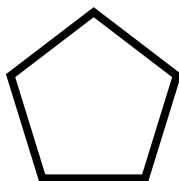
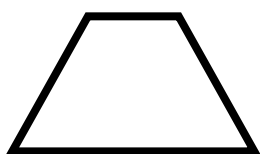
Which place is  $\frac{2}{3}$  of a mile from Elijah's apartment?

**Community Garden**

**School**

**Corner Store**

Circle the shape that has two pairs of  
parallel lines.



Fill in the missing number.

$$\boxed{\phantom{000}} - 271 = 579$$

$$1,065 = \boxed{\phantom{000}} + 347$$



10 stars in 2 equal groups.

5 stars in each group.

$10 \div 2 = \underline{5}$

Multiply.

$4 \times 3 = \underline{12}$

$1 \times 6 = \underline{6}$

$5 \times 9 = \underline{45}$

Solve.

$2,039 + 3,978 = \underline{6,017}$

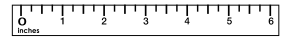
$4,230 - 1,861 = \underline{2,369}$

Mrs. Fischer bought 4 gallons of milk. If one gallon equals 8 pints, how many pints are in 4 gallons?

$4 \times 8 = 32$

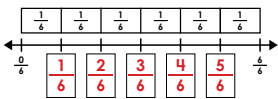
answer: 32 pints

How long is Quinn's name tag?



answer: 2 <sup>3</sup>/<sub>4</sub> inches

Label the fractions on the number line.



The large hill at Chestnut Ridge Park had 8 more people sledding than the small hill. There were 10 people sledding on the small hill. Which statement correctly explains how to find the number of people sledding on the large hill?

**Add 8 and 10 to find 18 people.**

**Subtract 8 from 10 to find 2 people.**

Complete the table.

Input	Output
7	42
8	<u>48</u>
9	<u>54</u>
10	<u>60</u>

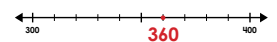
Rule: Multiply by 6

Fill in the missing numbers.

$6 \times \underline{7} = 42$

$7 \times \underline{6} = 42$

Round to the **nearest hundred** using the number line.



Label **360** on the number line.

Which is closer to 360?

**300** or **400**

360 rounded to the nearest



## Preview

Please log in to download the printable version of this worksheet.

Sophia finished cleaning her room in 25 minutes. It took her brother 15 minutes longer to finish cleaning his room. If they both started cleaning at 1:00, what time did Sophia's brother finish cleaning his room?

1:15

1:25

1:30

1:40

Complete the table.

Input	7	8	9	10
Output	<u>49</u>	<u>56</u>	<u>63</u>	70

Rule: Multiply by 7

Fill in the missing number.

9  $\times 8 = 72$

8  $\times 9 = 72$

Circle the number that does **not** round to 580.

583

576

585

582

575

Find the perimeter of the rectangle.



$9 + 9 + 7 + 7 = 32$

Perimeter = 32 yards

Solve.

Find the product of 10 and 4.

40

Multiply 3 by 8.

24



15 hearts in 5 equal groups.

3 hearts in each group.

$15 \div 5 = \underline{3}$

Elijah walked 1 mile from his apartment building to school. The number line below shows the places he passed along the way.




Which place is  $\frac{2}{3}$  of a mile from Elijah's apartment?

Community Garden

School      Corner Store

Circle the shape that has two pairs of parallel lines.



Fill in the missing number.

850  $- 271 = 579$

$271 + 579 = 850$

$1,065 = \underline{718} + 347$

$1,065 - 347 = 718$