


Name: _____

Math Buzz

Use the array to complete the number sentence.



____ + ____ + ____ = ____

Draw a line to match each number.

$200 + 30 + 5$

325

three hundred
twenty-five

253

2 hundreds
5 tens
3 ones

235

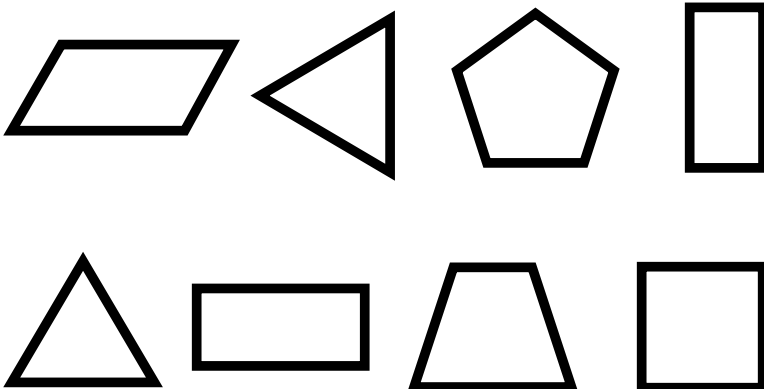


Preview

Please log in to download
the printable version of this worksheet.

answer: _____ ¢

Color the shapes that have 4 sides.



Fill in the missing numbers.





164	567

787	
351	

Name: _____



Math Buzz

Trees Planted	
May	
June	
July	
August	

How many trees did Emma's scout troop plant in August?

answer: _____

How many trees did they plant in June and July combined?

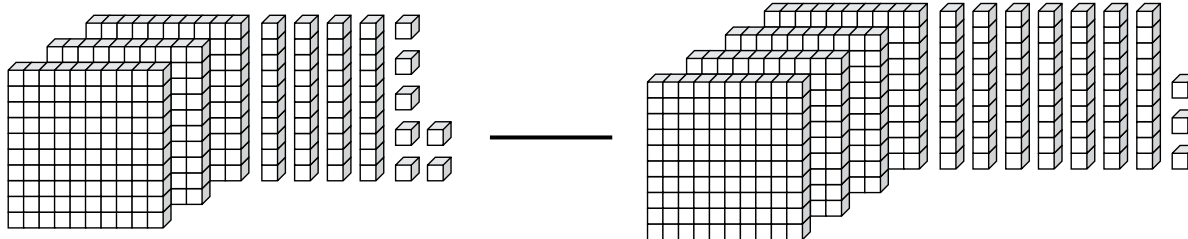
answer: _____



Preview

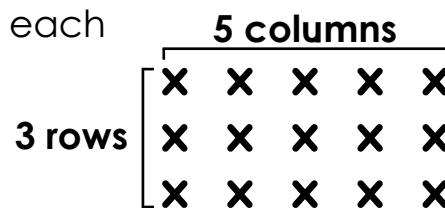
Please log in to download the printable version of this worksheet.

Compare using $>$, $<$, $=$.




Samson is having a backyard movie party. He set up 3 rows of chairs in front of his projector screen, and put 5 chairs in each row. How many chairs did Samson set up in all?

answer: _____ chairs



Name: _____




Math Buzz

Compare using $<$, $>$, or $=$.

$$50 + 7 \quad \underline{\hspace{1cm}} \quad 70 + 5$$

$$800 + 50 + 6 \quad \underline{\hspace{1cm}} \quad 600 + 50 + 8$$

Circle the units for measuring weight.

gallons**ounces**205 kids 132 kids 

Last year 205 kids went to summer camp at the community center. This year 132 kids went to camp. How many more kids went to camp last year than this year?



Preview

Please log in to download the printable version of this worksheet.

Add. Show your work

Find the sum of
127 and 209.

$$391 + 526 = \underline{\hspace{2cm}}$$

$$\begin{array}{r} 237 \\ + 254 \\ \hline \end{array}$$

answer: _____ kids

Circle the digits in the ones place.

455 **39** **942**

Circle the digits in the tens place.

36 **549** **627**

Circle the digits in the hundreds place.

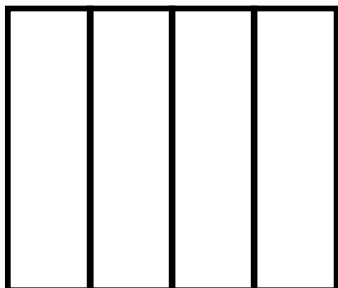
872 **652** **357**

Name: _____




Math Buzz

Shade to show each fraction.



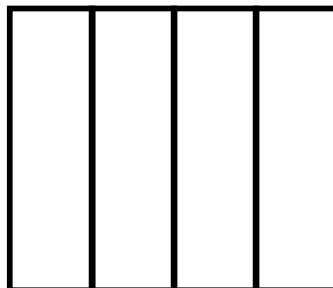
one-fourth

$$\frac{1}{4}$$



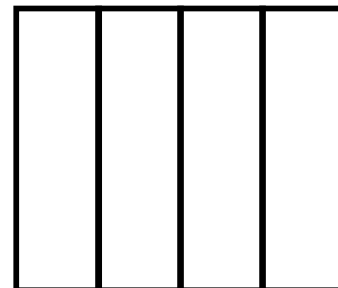
two-fourths

$$\frac{2}{4}$$



three-fourths

$$\frac{3}{4}$$



four-fourths

$$\frac{4}{4}$$



Preview

Please log in to download
the printable version of this worksheet.

answer: _____ pounds

Round each number.

	Nearest Ten	Nearest Hundred
612		
479		
126		

Solve. Show your work

$$865 - 598 = \underline{\hspace{2cm}}$$

$$197 + 426 = \underline{\hspace{2cm}}$$

$$574 - 165 = \underline{\hspace{2cm}}$$

$$727 + 149 = \underline{\hspace{2cm}}$$



Use the array to complete the number sentence.

$2 + 2 + 2 = 6$

Draw a line to match each number.

$200 + 30 + 5$ ~~325~~
~~253~~
 235

three hundred twenty-five
 2 hundreds
 5 tens
 3 ones

Lennon went to Randy's Candy Store. He bought a lollipop and a gumball. He paid with a \$1 bill. How much change did Lennon get back?

Randy's Candy Store	
Gumball.....	20¢
Lollipop.....	42¢
Chocolate.....	68¢

$42¢ + 20¢ = 62¢$
 $100¢ - 62¢ = 38¢$

answer: 38 ¢

Color the shapes that have 4 sides.

Fill in the missing numbers.

164	567
731	
$164 + 567 = 731$	
787	
351	436
$787 - 351 = 436$	

Age of Players and Travel Soccer Team

How many 13 and 14-year-olds are on the travel soccer team?
14 $10 + 4 = 14$

How many more 11-year-olds

Amirah volunteers at the recycling center every weekend. Last weekend, she helped sort 263 pounds of cans and bottles and 668 pounds of paper. How many pounds of recyclables did she help sort in all?

Show your work

Subtract. Show your work

Find the difference between 545 and 191.

354

$976 - 794 = 182$

Order the numbers from greatest to least.

962 923 944

962 944 923

Show two ways to make 75¢.

Preview

Please log in to download the printable version of this worksheet.

Compare using <, >, or =.

$50 + 7 < 70 + 5$

$800 + 50 + 6 > 600 + 50 + 8$

Last year 205 kids went to summer camp at the community center. This year 132 kids went to camp. How many more kids went to camp last year than this year?

Show your work

$205 - 132 = 73$

answer: 73 kids

Circle the units for measuring weight.

gallons ounces
 grams feet
 kilograms inches
 meters pounds
 minutes centimeters

Add. Show your work

Find the sum of 127 and 209.

336

$391 + 526 = 917$

Circle the digits in the ones place.

459 39 942

Circle the digits in the tens place.

36 549 627

Circle the digits in the hundreds place.

872 652 357

Shade to show each fraction.

one-fourth $\frac{1}{4}$ two-fourths $\frac{2}{4}$
 three-fourths $\frac{3}{4}$ four-fourths $\frac{4}{4}$

The male gorilla at the city zoo weighs 412 pounds. The female gorilla weighs 186 pounds. How much more does the male gorilla weigh than the female?

Show your work

$412 - 186 = 226$

answer: 226 pounds

Draw an array to represent the number sentence.

$4 + 4 + 4 + 4 + 4 = 20$

Round each number.

	Nearest Ten	Nearest Hundred
612	610	600
479	480	500
126	130	100

Solve.

$865 - 598 = 267$

$197 + 426 = 623$

$574 - 165 = 409$

$727 + 149 = 876$