

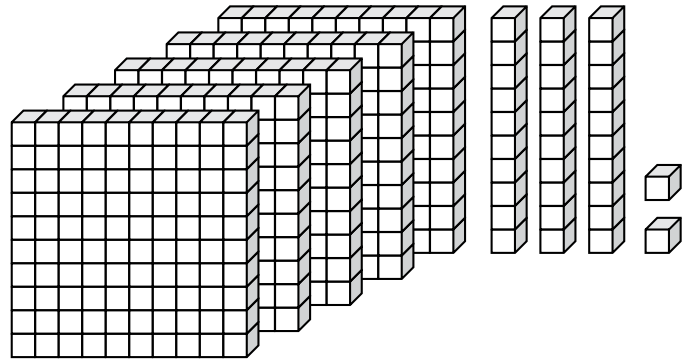
Name: _____

Math Buzz

Circle the word that names the equal parts.

--	--	--

halves thirds quarters

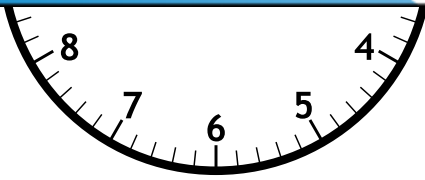


What number is shown? _____




Preview

Please log in to download the printable version of this worksheet.




answer: _____ points

How many fish are there in all?



answer: _____ fish

Name: _____



Math Buzz

Fill in the missing numbers.

186	514

472	
155	

Deja logged 161 minutes of reading on her reading log last week. This week she logged 189 minutes of reading. How many minutes did Deja log for both weeks combined?






Show your work


answer: _____ minutes



Preview

Please log in to download the printable version of this worksheet.

	 
Cyrus	  

Each  = 1 goal

the team score?

answer: _____

Write the numbers in standard form.

one hundred ninety-four


600 + 50 + 2

How many sides?

answer: _____

How many angles?

answer: _____

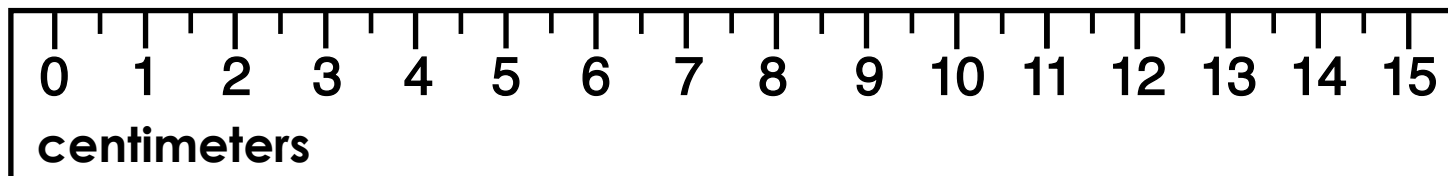


Name: _____



Math Buzz

How long is the paper clip?



The paper clip is _____ centimeters long.



Preview

Please log in to download
the printable version of this worksheet.

answer:

_____ ¢

Write the number in word form.

825


Add. Show your work

$$\begin{array}{r} 313 \\ + 609 \\ \hline \end{array}$$

Find the sum of 224 and 738. _____

$$549 + 160 = \underline{\hspace{2cm}}$$

Name: _____

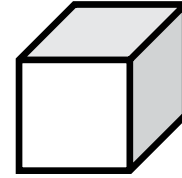


Math Buzz

Write the number in expanded form.

413


Choose the name of the shape.



cube

cone

sphere



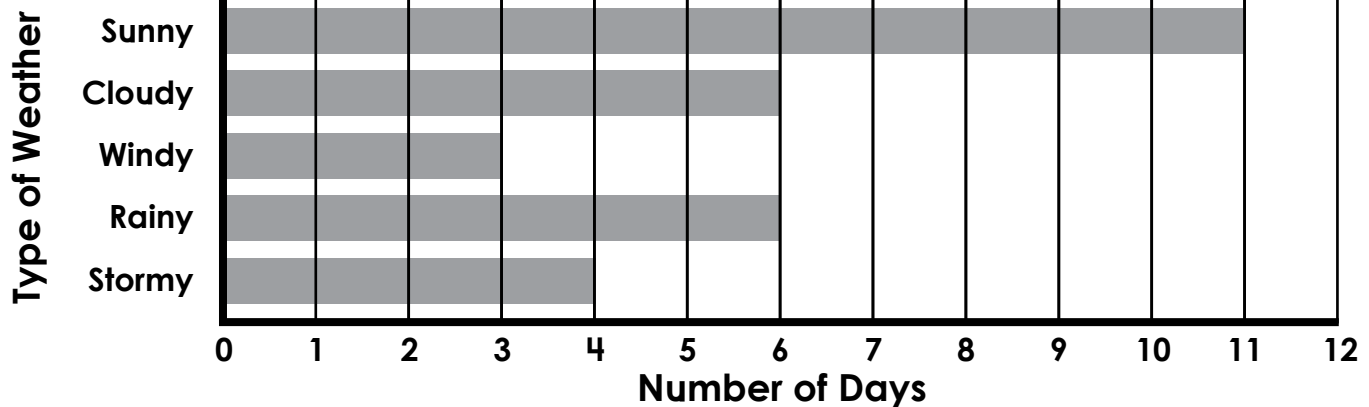
Last week, Connor spent 270 minutes at soccer practice and 120 minutes at soccer games. How many total minutes



Preview

Please log in to download the printable version of this worksheet.

SEPTEMBER WEATHER



How many more sunny days than cloudy days? answer: _____

How many rainy and stormy days combined? answer: _____




Name: _____

Math Buzz

Enzo and his family hiked Timber Trail before lunch and Ridge Run after lunch. The length of Timber Trail is 305 meters and Ridge Run is 35 meters longer. How long is Ridge Run?

Timber Trail



305 meters

Round to the **nearest ten**.

25 _____ 72 _____

Round to the **nearest hundred**.

918 _____ 390 _____

Circle the object that weighs more.



Preview

Please log in to download the printable version of this worksheet.

answer: _____ meters

Compare each set of numbers using $>$, $<$, $=$.

80 _____ 57

68 _____ 132

201 _____ 95

520 _____ 376

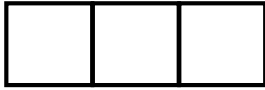
Find the difference between 465 and 172.

936 - 496 = _____

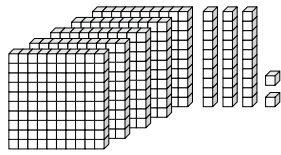
$$\begin{array}{r} 542 \\ - 314 \\ \hline \end{array}$$



Circle the word that names the equal parts.



halves **thirds** quarters



What number is shown?

532

Circle the digital clock that shows the same time as the analog clock.



9:54

11:46

10:46


Mr. Burke's class needs 250 points to earn outdoor free time. If they already have 165 points, how many more points do they need to earn?

Show your work

$$250 - 165 = 85$$

answer: **85** points

How many fish are there in all?



answer: **10** fish

Fill in the missing numbers.

700	
186	514
186 + 514 = 700	
472	

Deja logged 161 minutes of reading on her reading log last week. This week she logged 189 minutes of reading. How many minutes did Deja log for both weeks combined?

Show your work

$$161 + 189 = 350$$

	Goals Scored
Luca	
Avery	
Yessenia	
Cyus	

Which player(s) scored more goals than Luca?

answer: **Avery**


Write the numbers in standard form.

one hundred ninety-four

194

$$600 + 50 + 2$$

652



How many sides?

answer: **0**

Preview

Please log in to download the printable version of this worksheet.

Write the number in expanded form.


413

$$400 + 10 + 3$$

Choose the name of the shape.



cube cone sphere



$$2 + 2 = 4$$

$$2 \text{ groups of } 2 = 4$$

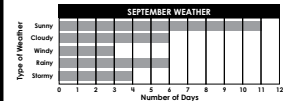
$$2 \times 2 = 4$$

Last week, Connor spent 270 minutes at soccer practice and 120 minutes at soccer games. How many total minutes did Connor spend at soccer?

Show your work

$$270 + 120 = 390$$

answer: **390** minutes



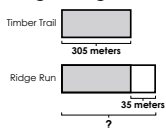
How many more sunny days than cloudy days?

answer: **5**

How many rainy and stormy days combined?

answer: **10**

Enzo and his family hiked Timber Trail before lunch and Ridge Run after lunch. The length of Timber Trail is 305 meters and Ridge Run is 35 meters longer. How long is Ridge Run?



answer: **340** meters

Round to the **nearest ten**.

25 30 72 70

Round to the **nearest hundred**.

918 900 390 400

Circle the object that weighs more.



leaf



pumpkin

Compare each set of numbers using $>$, $<$, $=$.

$$80 > 57$$

$$68 < 132$$

$$201 > 95$$

$$520 > 376$$

Subtract. Show your work

Find the difference between 465 and 172.

293

$$936 - 496 = 440$$

$$\begin{array}{r} 312 \\ 542 \\ - 314 \\ \hline 228 \end{array}$$