
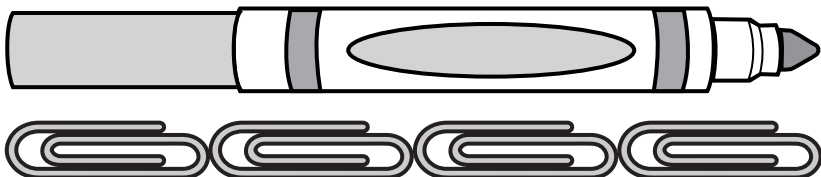


Name: _____



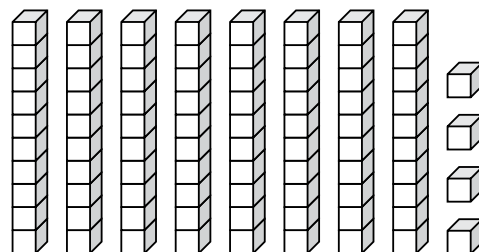
Math Buzz

How many paper clips long is the marker?



answer: _____ paper clips

Write how many tens and ones. Write the number.



Make a group of 10. Then, complete the number bond.



Tens	Ones



Preview

Please log in to download the printable version of this worksheet.

On Monday, Jim collected 8 shells at the beach. On Tuesday, he collected 9 shells. How many shells did he collect in all?

8	9
?	

_____ + _____ = _____

answer: _____ shells

cube



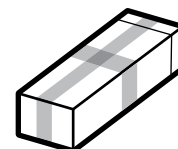
rectangular prism



cylinder




cone



sphere



Name: _____



Math Buzz

Complete the table.

Number of Cars	Number of Tires
1	4
2	8
3	12

Compare using $>$, $<$, or $=$.

23 _____ 32

67 _____ 57

98 _____ 89

Make a group of 10.


Then, complete the number bond.



Preview

Please log in to download
the printable version of this worksheet.

10, _____, _____, _____, _____, _____, 60,
_____, _____, _____, _____, _____, 120.



Count on.




How much money is there in all? _____ ¢

Name: _____

Math Buzz



Count the objects and fill in the chart.



Tens	Ones

answer: _____

Add.

$$7 + 8 = \underline{\quad}$$

$$3 + 11 = \underline{\quad}$$

$$13 + 6 = \underline{\quad}$$

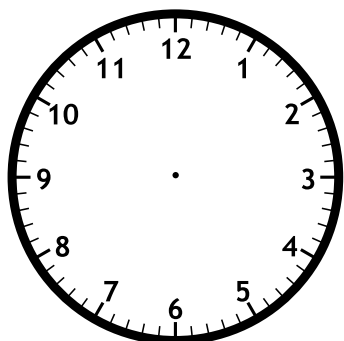
Fill in the times shown

How many tiles long is the lizard?



Preview


Please log in to download the printable version of this worksheet.



answer: _____ tiles

Tamir had 25¢. He spent 10¢. Draw coins to show how much money Tamir has left.

Name: _____



Math Buzz

Count by fives to complete the chart.

1	2	3	4		6	7	8	9	
11	12	13	14		16	17	18	19	
21	22	23	24		26	27	28	29	
31	32	33	34		36	37	38	39	
41	42	43	44		46	47	48	49	
51	52	53	54		56	57	58	59	

Add.

$$\begin{array}{r} 12 \\ + 8 \\ \hline \end{array}$$

$$\begin{array}{r} 11 \\ + 5 \\ \hline \end{array}$$

$$\begin{array}{r} 6 \\ + 3 \\ \hline \end{array}$$

Show two ways to make 50¢.

50¢



Preview

Please log in to download
the printable version of this worksheet.

4 tens 5 ones _____ 54

8 tens 3 ones _____ 3 tens 8 ones

Corey's hair was 17 inches long. She got 5 inches cut off. How long is Corey's hair now?

Show your work

answer: _____ inches


50¢

Name: _____



Math Buzz

Use the bar graph to answer the questions below.





How many students chose soccer? _____



Preview

Please log in to download the printable version of this worksheet.



Circle **two** different ways to show the number: **fifty-seven**

- a. 7 tens + 5 ones
- b. 57
- c. 5 tens + 7 ones
- d. 75

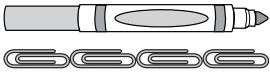
Add.

$$4 + 11 = \underline{\quad\quad} \quad 6 + 5 = \underline{\quad\quad}$$

$$6 + 8 = \underline{\quad\quad} \quad 12 + 5 = \underline{\quad\quad}$$

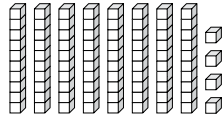


How many paper clips long is the marker?



answer: 4 paper clips

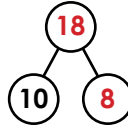
Write how many tens and ones. Write the number.



Tens	Ones
8	4

answer: 84

Make a group of 10. Then, complete the number bond.



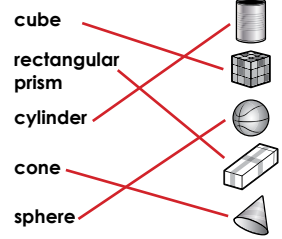
On Monday, Jim collected 8 shells at the beach. On Tuesday, he collected 9 shells. How many shells did he collect in all?

8	9
?	

8 + 9 = 17

answer: 17 shells

Draw a line to match each shape.



Complete the table.

Number of Cars	Number of Tires
1	4
2	8
3	12
4	16

Compare using >, <, or =.

23 < 32

67 > 57

98 > 89


Count by tens to 120.

10, 20, 30, 40, 50,

60, 70, 80, 90, 100,

110, 120.

Make a group of 10. Then, complete the number bond.



Count on.



10¢ 11¢ 12¢ 13¢ 14¢

How much money is

Preview

Please log in to download the printable version of this worksheet.

Count by fives to complete the chart.

1	2	3	4	5	6	7	8	9	10
11	12	13	14	15	16	17	18	19	20
21	22	23	24	25	26	27	28	29	30
31	32	33	34	35	36	37	38	39	40
41	42	43	44	45	46	47	48	49	50
51	52	53	54	55	56	57	58	59	60
61	62	63	64	65	66	67	68	69	70
71	72	73	74	75	76	77	78	79	80

Add.

$\begin{array}{r} 12 \\ + 8 \\ \hline 20 \end{array}$ $\begin{array}{r} 11 \\ + 5 \\ \hline 16 \end{array}$ $\begin{array}{r} 6 \\ + 3 \\ \hline 9 \end{array}$

Compare using >, <, or =.

36 = 3 tens 6 ones

4 tens 5 ones < 54

8 tens 3 ones >

3 tens 8 ones

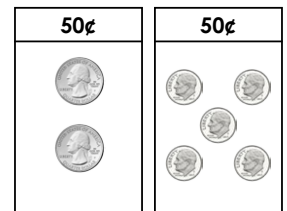
Corey's hair was 17 inches long. She got 5 inches cut off. How long is Corey's hair now?

Show your work

17 - 5 = 12


answer: 12 inches

Show two ways to make 50¢.



Answers may vary.

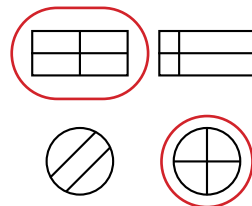
Use the bar graph to answer the questions below.



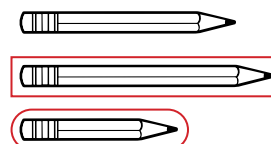
How many students chose soccer? 9

How many students chose baseball and football combined? 11

Circle the shapes that have 4 equal parts.



Draw a circle around the shortest pencil. Draw a rectangle around the longest pencil.



Circle **two** different ways to show the number: **fifty-seven**

a. 7 tens + 5 ones

b. 57

c. 5 tens + 7 ones

d. 75

Add.

4 + 11 = 15

6 + 5 = 11

6 + 8 = 14

12 + 5 = 17