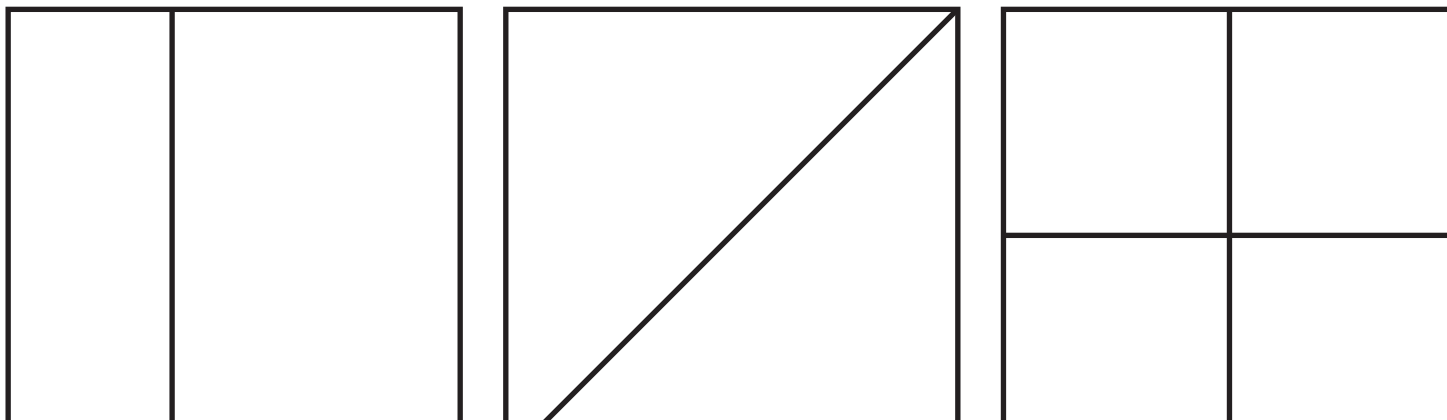


Name: _____



Math Buzz

Dean cut his sandwich into equal halves. Which of these choices could show how Dean cut his sandwich.



Preview

Please log in to download
the printable version of this worksheet.


39 _____ 62

Use a centimeter ruler to draw a line 5 centimeters long.

Count on by ones.

244, 245, _____, _____, _____, 249, _____, _____, 252

Name: _____



Math Buzz

Circle two different ways to show the number **318**.

- a. three hundred eighty
- b. $300 + 10 + 8$
- c. $300 + 80$
- d. three hundred eighteen

Fina played her favorite game on her tablet for 16 minutes before dinner and 27 minutes after dinner. How many total minutes did Fina play her game for?

16	27
?	

+

=



Preview

Please log in to download the printable version of this worksheet.

Solve.


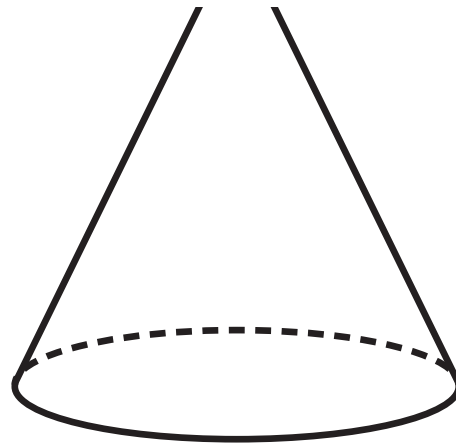
452

Add 10

Subtract 10

Add 10

Subtract 10



Name: _____



Math Buzz

Add.

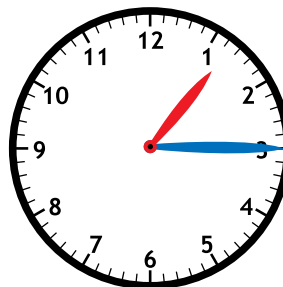
$$36 + 4 = \underline{\quad}$$

$$\underline{\quad} = 74 + 3$$

Add.

$$\begin{array}{r} 5 \\ 1 \\ + 8 \\ \hline \end{array}$$

Match each clock with the correct time.



Mrs. Tanner baked 32 gingerbread cookies. She decorated 6 cookies and her children decorated the rest.



Preview

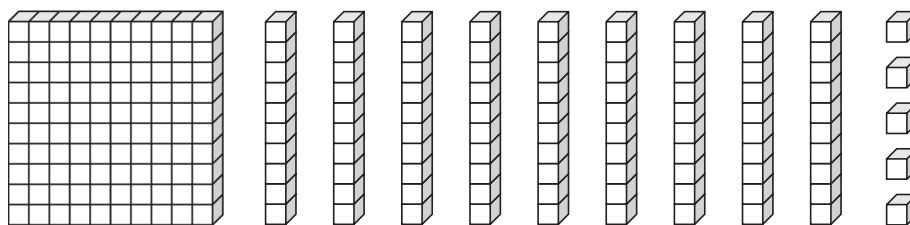
Please log in to download the printable version of this worksheet.

answer: _____ cookies



Circle the value of the underlined digit.

195




100

10

1

Name: _____

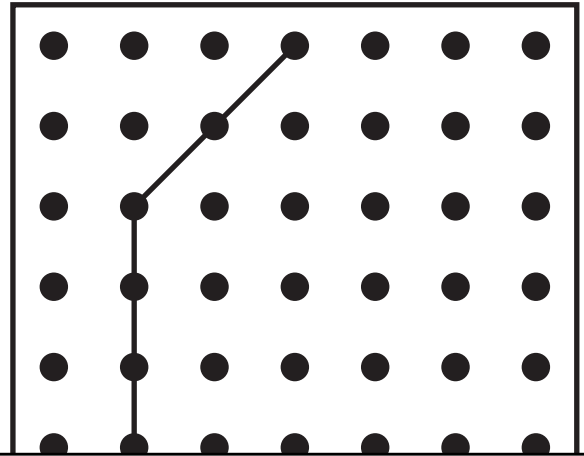


Math Buzz

Circle two different ways to show the number **two hundred thirty**.

- a. $200 + 30$
- b. 203
- c. two hundred thirteen
- d. 230

Draw more sides to complete the pentagon.

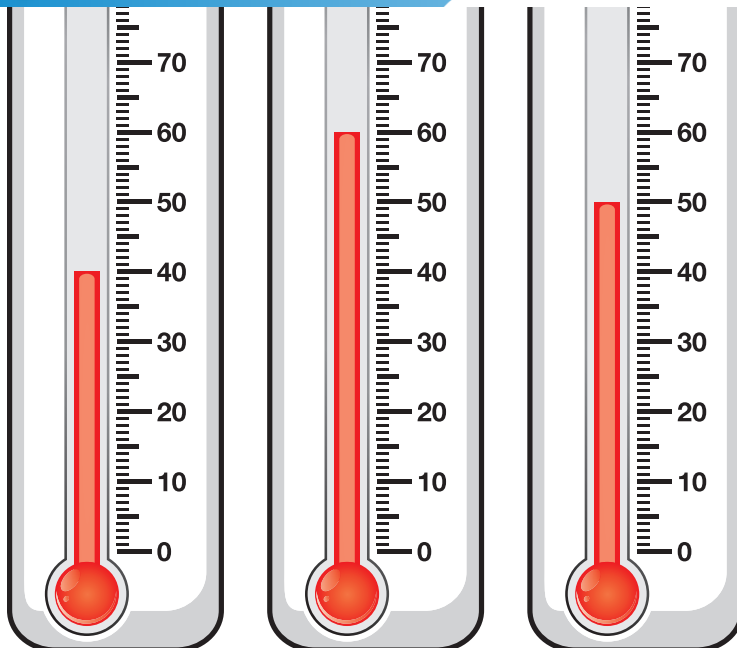


The temperature was 50°F while



Preview

Please log in to download the printable version of this worksheet.



Add 100	Subtract 100

Rewrite the problem.
Then find the difference.

$$37 - 2 = \underline{\quad}$$

Name: _____




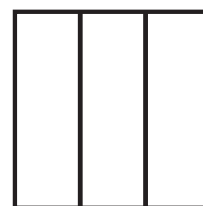
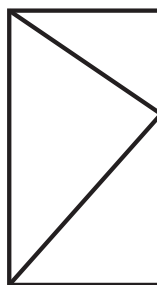


Math Buzz

Solve.

$$9 + 8 = \underline{\hspace{2cm}}$$


$$17 - 9 = \underline{\hspace{2cm}}$$

Circle the shapes that have three equal parts.




Preview

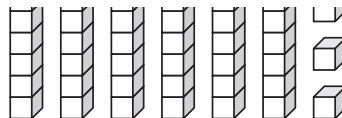
Please log in to download
the printable version of this worksheet.



300



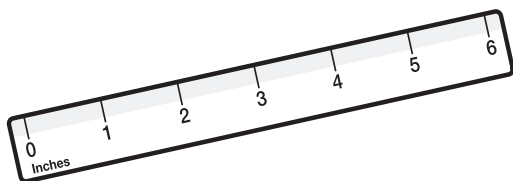
30



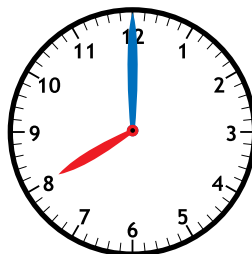
3

Find the sum
of 89 and 8.

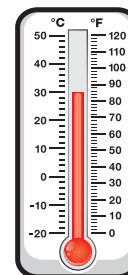
Which tool should Gabi use to measure the length of her desk?



inch ruler



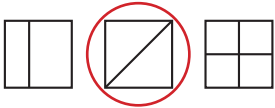
clock



thermometer



Dean cut his sandwich into equal halves. Which of these choices could show how Dean cut his sandwich.



Compare using $>$, $<$, or $=$.

$81 > 57$

$39 < 62$

Add.

$$\begin{array}{r} 1 \\ 28 \\ + 7 \\ \hline 35 \end{array} \quad \begin{array}{r} 93 \\ + 6 \\ \hline 99 \end{array} \quad \begin{array}{r} 1 \\ 57 \\ + 4 \\ \hline 61 \end{array}$$

Use a centimeter ruler to draw a line 5 centimeters long.

Line drawn should measure 5 centimeters.

Count on by ones.

$244, 245, 246,$

$247, 248, 249,$

$250, 251, 252$

Circle two different ways to show the number **318**.

a. three hundred eighty

b. $300 + 10 + 8$

c. $300 + 80$

Fina played her favorite game on her tablet for 16 minutes before dinner and 27 minutes after dinner. How many total minutes did Fina play her game for?

16	27
?	

$16 + 27 = 43$

Rewrite the problem. Then find the difference.

$29 - 5 = 24$

$$\begin{array}{r} 29 \\ - 5 \\ \hline 24 \end{array}$$

Solve.

452

Add 10
462

Subtract 10
442

Which is the face of a cone?



Preview

Please log in to download the printable version of this worksheet.

answer: 40 cookies

Circle two different ways to show the number **two hundred thirty**.

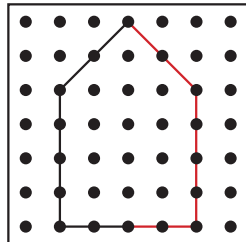
a. $200 + 30$

b. 203

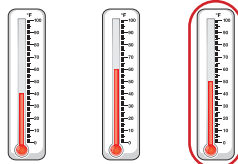
c. two hundred thirteen

d. 230

Draw more sides to complete the pentagon.



The temperature was 50°F while Mr. Blum was raking leaves. Circle the thermometer that shows 50°F.



Solve.

581

Add 100
681

Subtract 100
481

Rewrite the problem. Then find the difference.

$37 - 2 = 35$

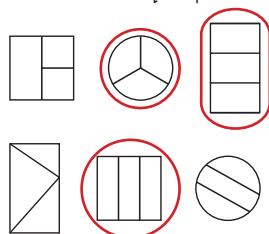
$$\begin{array}{r} 37 \\ - 2 \\ \hline 35 \end{array}$$

Solve.

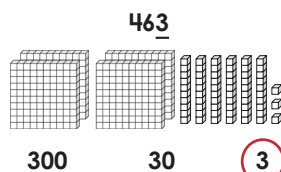
$9 + 8 = 17$

$17 - 9 = 8$

Circle the shapes that have three equal parts.



Circle the value of the underlined digit.

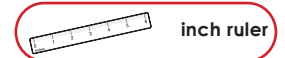


Solve.

Add 65 and 3. 68

Find the sum of 89 and 8. 97

Which tool should Gabi use to measure the length of her desk?



clock



thermometer