


Name: \_\_\_\_\_



# Math Buzz

Subtract.

$$\begin{array}{r} 11 \\ - 5 \\ \hline \end{array} \quad \begin{array}{r} 9 \\ - 2 \\ \hline \end{array} \quad \begin{array}{r} 15 \\ - 6 \\ \hline \end{array}$$

Layna had 7 purple, 3 orange, and 4 red fruit snacks in her lunch. How many total fruit snacks did Layna have?

Show your work

answer: \_\_\_\_\_ fruit snacks

Count by hundreds.


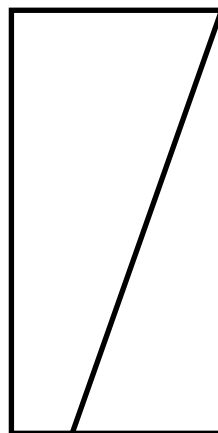
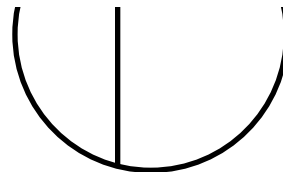
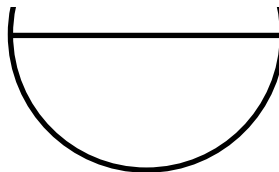



# Preview

Please log in to download the printable version of this worksheet.

Wednesday

Saturday

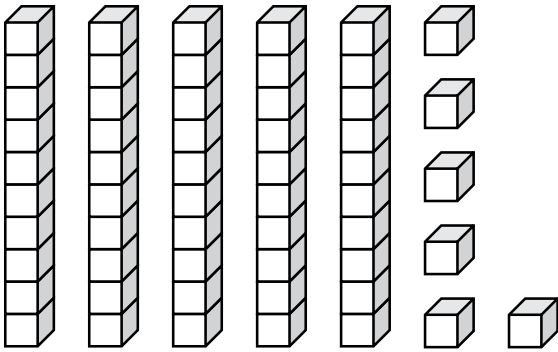




Name: \_\_\_\_\_

# Math Buzz

Count the blocks. Fill in the missing numbers.

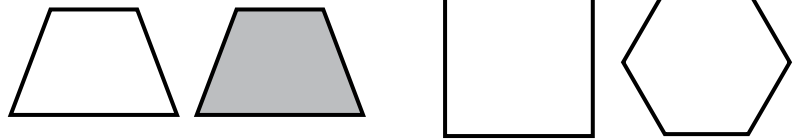


fifty-six

Circle the **defining** attribute.

Color

Number of Sides



Circle the **non-defining** attribute.

Size

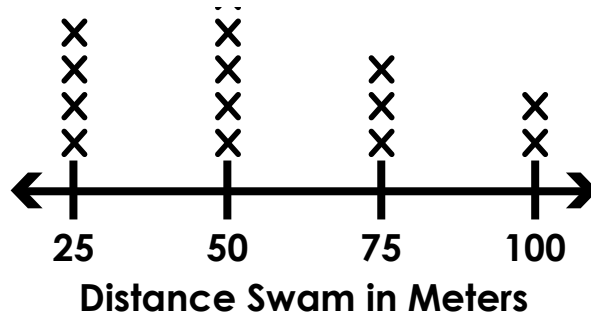
Number of Corners



# Preview

Please log in to download the printable version of this worksheet.

18		
+ , -		
5		13
_____	+	_____ = _____
_____	+	_____ = _____
_____	-	_____ = _____
_____	-	_____ = _____



- b. 6
- c. 9
- d. 4

Saul has 2 dimes, 1 nickel, and 5 pennies. What is the total value of Saul's coins?

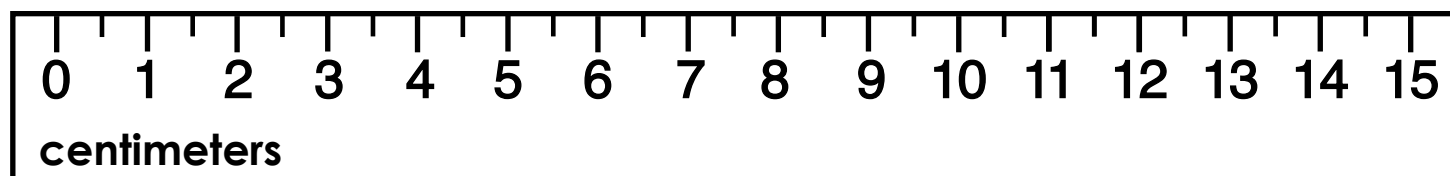
answer: \_\_\_\_\_ ¢

Name: \_\_\_\_\_



# Math Buzz

How many centimeters long is the paper clip?



answer: \_\_\_\_\_ centimeters

Kian picked 10 apples. Ruby picked \_\_\_\_\_ apples. Solve.



## Preview

Please log in to download the printable version of this worksheet.


$$\underline{\quad} - \underline{\quad} = \underline{\quad}$$

answer: \_\_\_\_\_ apples


$$14 + 3 = 3 + \underline{\quad}$$

$$\underline{\quad} + 9 = 9 + 7$$

Draw a line to divide each shape into equal halves.



Name: \_\_\_\_\_

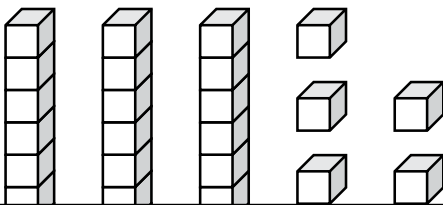


# Math Buzz

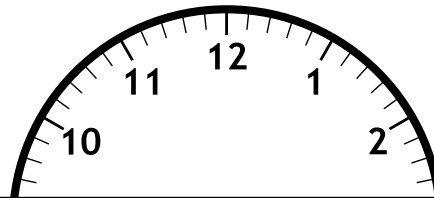
Subtract.

$$8 - 7 = \underline{\quad\quad} \quad \underline{\quad\quad} = 14 - 0 \quad 10 - 3 = \underline{\quad\quad}$$

Count the blocks. Fill in the missing numbers.



The second graders eat lunch at 30 minutes after 12. Fill in the clocks to show what time the students eat lunch.

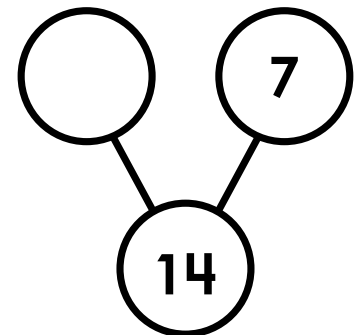
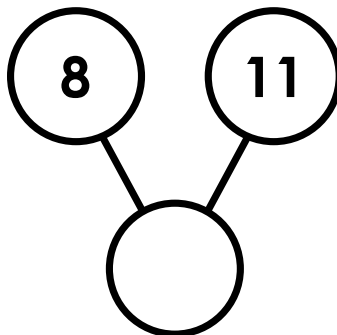
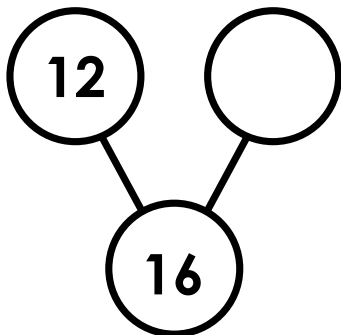


# Preview

Please log in to download the printable version of this worksheet.

$$\underline{\quad\quad} + \underline{\quad\quad} = \underline{\quad\quad}$$

Complete the number bonds.








Name: \_\_\_\_\_



# Math Buzz

Draw what shape comes next.



\_\_\_\_\_

Solve.

Subtract 9 from 13. \_\_\_\_\_

Add to continue the pattern.

$2 + 5 =$  \_\_\_\_\_  $32 + 5 =$  \_\_\_\_\_



## Preview

Please log in to download the printable version of this worksheet.

Recess Activities		Total
Chalk	+++	
Playground	+++ IIII	
Tag	+++ II	

How many children chose tag? \_\_\_\_\_

Which activity did the most children choose?  
\_\_\_\_\_

The first book had 18 pages. The second book had 7 more pages. How many pages did the second book have?

18	7
?	

\_\_\_\_\_ + \_\_\_\_\_ = \_\_\_\_\_

answer: \_\_\_\_\_ pages



Subtract.

$$\begin{array}{r} 11 \\ - 5 \\ \hline 6 \end{array} \quad \begin{array}{r} 9 \\ - 2 \\ \hline 7 \end{array} \quad \begin{array}{r} 15 \\ - 6 \\ \hline 9 \end{array}$$

Layna had 7 purple, 3 orange, and 4 red fruit snacks in her lunch. How many total fruit snacks did Layna have?

Show your work

$$7 + 3 + 4 = 14$$

answer: 14 fruit snacks

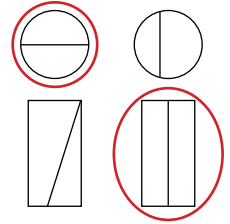
Count by hundreds.

100, 200, 300, 400,  
500, 600, 700,  
800, 900

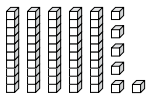
Fill in the missing days of the week.

Monday
<u>Tuesday</u>
Wednesday
<u>Thursday</u>
<u>Friday</u>
Saturday
<u>Sunday</u>

Circle the shapes that have equal halves.



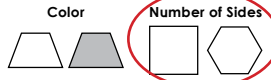
Count the blocks. Fill in the missing numbers.



fifty-six

5 tens 6 ones  
50 + 6

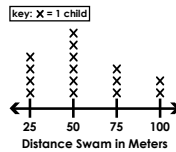
Circle the **defining** attribute.



Circle the **non-defining** attribute.

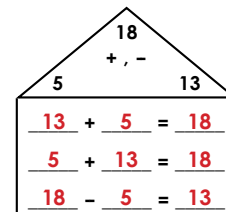


Use the line plot. How many children swam 50 meters?




- a. 5  
**b. 6**  
c. 9  
d. 4

Complete the fact family.



Saul has 2 dimes, 1 nickel, and 5 pennies. What is the total value of Saul's coins?





# Preview

Please log in to download the printable version of this worksheet.

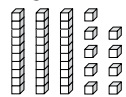
Subtract.

$$8 - 7 = \underline{1}$$

$$\underline{14} = 14 - 0$$

$$10 - 3 = \underline{7}$$

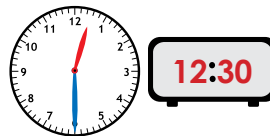
Count the blocks. Fill in the missing numbers.



thirty-nine

3 tens 9 ones  
30 + 9  
39

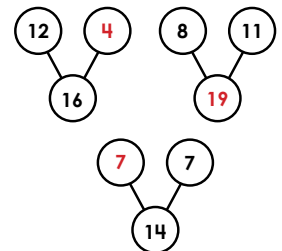
The second graders eat lunch at 30 minutes after 12. Fill in the clocks to show what time the students eat lunch.



Draw 3 coins to show exactly 20¢.



Complete the number bonds.



Draw what shape comes next.



Solve.

Subtract 9 from 13. 4

Take 6 away from 12. 6

Add to continue the pattern.

$$2 + 5 = \underline{7}$$

$$12 + 5 = \underline{17}$$

$$22 + 5 = \underline{27}$$

$$32 + 5 = \underline{37}$$

$$42 + 5 = \underline{47}$$

$$52 + 5 = \underline{57}$$

Complete the tally chart. Use the tally chart to answer the questions below.

How many children chose tag? 7

Which activity did the most children choose?

Playground

Joss read two books before bed. The first book had 18 pages. The second book had 7 more pages. How many pages did the second book have?

18	7
?	

$$18 + 7 = 25$$

answer: 25 pages