

Name: \_\_\_\_\_



# Math Buzz

Find the total value of the pennies.



answer: \_\_\_\_\_ ¢

Solve each side and compare using  $<$ ,  $>$ , or  $=$ .

$$8 + 7 \bigcirc 4 + 9$$

Add.

$$\begin{array}{r} 82 \\ + 5 \\ \hline \end{array}$$

Noah's Birthday is in 26 days. Rylee's birthday is 3 days before Noah's. How many days until Rylee's birthday?




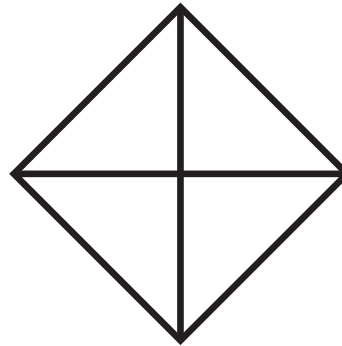


answer: \_\_\_\_\_ days

Name: \_\_\_\_\_



# Math Buzz

Color one quarter of each shape.



Fill in the missing numbers.

Circle groups of two.



# Preview

Please log in to download the printable version of this worksheet.

	91	
	10 more	



Are there any left over?

\_\_\_\_\_

Is 8 even or odd?

\_\_\_\_\_

Subtract.

$$77 - 6 = \underline{\hspace{2cm}}$$

Name: \_\_\_\_\_



# Math Buzz

Find the total value of the nickels.



answer: \_\_\_\_\_ ¢










Add.


$$64 + 3 = \underline{\hspace{2cm}}$$

Solve each side and compare the using  $<$ ,  $>$ , or  $=$ .

## Preview

Please log in to download  
the printable version of this worksheet.


Thea					
Kai					
Owen					

Each  = 1 balloon

Owen popped 3 more balloons than Thea. Complete the graph to show how many balloons Owen popped.



How many balloons did the kids pop combined? \_\_\_\_\_

Name: \_\_\_\_\_



# Math Buzz

Count the sticks and fill in the missing numbers.



1 more is \_\_\_\_\_.

10 more is \_\_\_\_\_.



1 less is \_\_\_\_\_.

10 less is \_\_\_\_\_.



## Preview

Please log in to download the printable version of this worksheet.



Subtract.

$$\begin{array}{r} 95 \\ - 2 \\ \hline \end{array}$$

Are there any left over?

\_\_\_\_\_

Is 7 even or odd?

\_\_\_\_\_

Name: \_\_\_\_\_


# Math Buzz

Find the total value of the dimes.



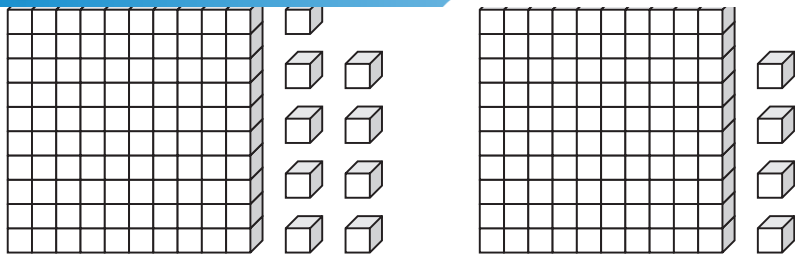
answer: \_\_\_\_\_ ¢

Count how many of each shape is shown in the block tower.



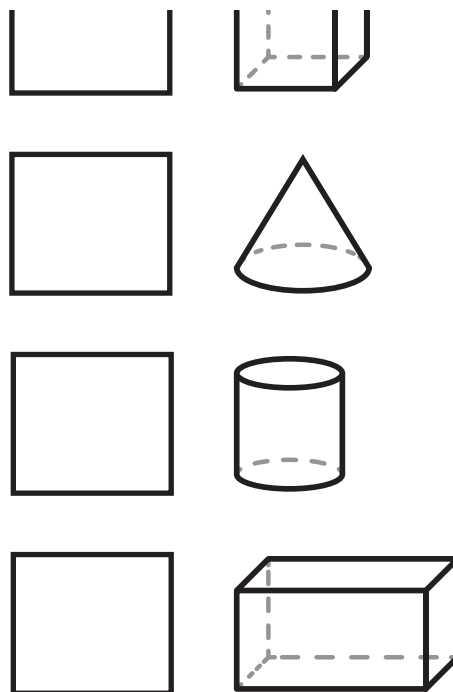
# Preview

Please log in to download  
the printable version of this worksheet.



\_\_\_\_\_ is greater than \_\_\_\_\_

\_\_\_\_\_ &gt; \_\_\_\_\_





Find the total value of the pennies.



answer: **8** ¢

Solve each side and compare using <, >, or =.

$$8 + 7 > 4 + 9$$

**15**                      **13**

Add.

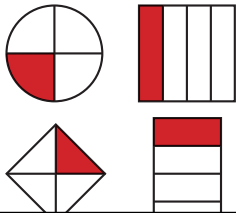
$$\begin{array}{r} 82 \\ + 5 \\ \hline 87 \end{array}$$

Noah's Birthday is in 26 days. Rylee's birthday is 3 days before Noah's. How many days until Rylee's birthday?

$$26 - 3 = 23$$

answer: **3** days

Color one quarter of each shape.



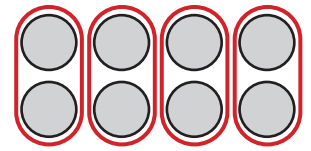
Fill in the missing numbers.

	10 less	
	<b>81</b>	
1 less	91	1 more
<b>90</b>		<b>92</b>
	10 more	
	<b>101</b>	

Subtract.

$$77 - 6 = \underline{71}$$

Circle groups of two.



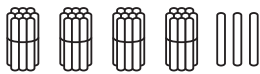
Are there any left over? **no**



# Preview

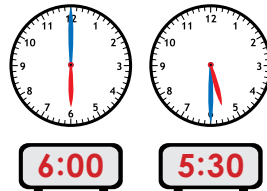
Please log in to download the printable version of this worksheet.

Count the sticks and fill in the missing numbers.



1 more is **44**.  
 1 less is **42**.  
 10 more is **54**.  
 10 less is **34**.

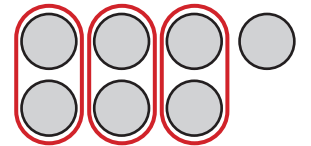
Fill in the times shown on the clocks.



Subtract.

$$\begin{array}{r} 95 \\ - 2 \\ \hline 93 \end{array}$$

Circle groups of two.



Are there any left over? **yes**

Is 7 even or odd? **odd**

Find the total value of the dimes.



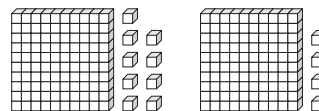
answer: **50** ¢

Solve.

Find the sum of 40 and 9. **49**

$$40 + 9 = 49$$

Compare.



**109** is greater than **104**

$$109 > 104$$

Count how many of each shape is shown in the block tower.

