

1. Coin Identification


What coin is this?



2. Coin Identification

A penny has a value of

_____.



Preview

Please log in to download
the printable version of this worksheet.

Which coin has a value
of 5¢?

penny nickel dime

What coin is this?



nickel dime quarter


5. Coin Identification

What coin is this?



6. Coin Identification

A quarter has a value
of _____.



Preview

Please log in to download
the printable version of this worksheet.

Which coin has a value
of 1¢?

penny nickel quarter

What coin is this?



nickel dime quarter

9. Coin Identification


What coin is this?



10. Coin Identification

A dime has a value of

_____.



Preview

Please log in to download the printable version of this worksheet.

Which coin has a value of 25¢?

nickel dime quarter

What coin is this?



penny nickel dime


13. Coin Identification

What coin is this?



14. Coin Identification

A nickel has a value of _____.



Preview

Please log in to download the printable version of this worksheet.

Which coin has a value of 10¢?

penny dime quarter

What coin is this?



nickel dime quarter

Name: _____

Task Cards: Coin Identification

Preview

Please log in to download
the printable version of this worksheet.



8. _____

16. _____

ANSWER KEY

Task Cards: Coin Identification

1. **quarter**

9. **nickel**

Preview

Please log in to download
the printable version of this worksheet.



8. **quarter**

16. **nickel**