

Name: _____

Fruit Stand

Money


Key for
Drawing Coins

P = 1¢

N = 5¢

D = 10¢

Q = 25¢




35¢

27¢

29¢

48¢



Preview

Please log in to download
the printable version of this worksheet.

2. Draw the coins needed to buy a banana.
Use the fewest number of coins possible. (5 coins) _____
3. Draw the coins needed to buy an orange.
Use the fewest number of coins possible. (3 coins) _____
4. Draw the coins needed to buy a peach.
Use the fewest number of coins possible. (6 coins) _____
5. A boy has 4 dimes and a nickel.
Which fruits could he buy? _____

ANSWER KEY

Fruit Stand

Money

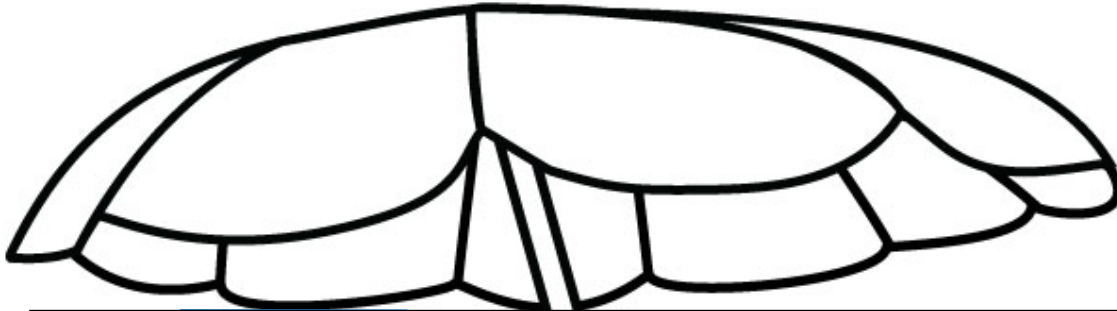
Key for Drawing Coins

P = 1¢

N = 5¢

D = 10¢

Q = 25¢



Preview

Please log in to download the printable version of this worksheet.



- 1. U
- 2. U
- 3. U
- 4. U

4. Draw the coins needed to buy a peach. Use the fewest number of coins possible. (6 coins) Q D D P P P

5. A boy has 4 dimes and a nickel. Which fruits could he buy? apple, orange, or banana